


# KAPLAN

TEST PREP



## GMAT Practice Questions

# KAPLAN

## TEST PREP



### GMAT Critical Reasoning Practice Questions

#### Question 1

In Los Angeles, a political candidate who buys saturation radio advertising will get maximum name recognition.

The statement above logically conveys which of the following?

- A. Radio advertising is the most important factor in political campaigns in Los Angeles.
- B. Maximum name recognition in Los Angeles will help a candidate to win a higher percentage of votes cast in the city.
- C. Saturation radio advertising reaches every demographically distinct sector of the voting population of Los Angeles.
- D. For maximum name recognition a candidate need not spend on media channels other than radio advertising.
- E. A candidate's record of achievement in the Los Angeles area will do little to affect his or her name recognition there.

#### Answers and Explanations

You can download the answers and explanations on our [website](#) for FREE!



---

## Question 2

The rate of violent crime in this state is up 30 percent from last year. The fault lies entirely in our court system: Recently our judges' sentences have been so lenient that criminals can now do almost anything without fear of a long prison term.

The argument above would be weakened if it were true that

- A. 85 percent of the other states in the nation have lower crime rates than does this state.
- B. White collar crime in this state has also increased by over 25 percent in the last year.
- C. 35 percent of the police in this state have been laid off in the last year due to budget cuts.
- D. Polls show that 65 percent of the population in this state opposes capital punishment.
- E. The state has hired 25 new judges in the last year to compensate for deaths and retirements.

## Answers and Explanations

You can download the answers and explanations on our [website](#) for FREE!



---

### Question 3

3. The increase in the number of newspaper articles exposed as fabrications serves to bolster the contention that publishers are more interested in boosting circulation than in printing the truth. Even minor publications have staffs to check such obvious fraud.

The argument above assumes that

- A. Newspaper stories exposed as fabrications are a recent phenomenon.
- B. Everything a newspaper prints must be factually verifiable.
- C. Fact checking is more comprehensive for minor publications than for major ones.
- D. Only recently have newspapers admitted to publishing intentionally fraudulent stories.
- E. The publishers of newspapers are the people who decide what to print in their newspapers.

### Answers and Explanations

You can download the answers and explanations on our [website](#) for FREE!



---

#### Question 4

Time and again it has been shown that students who attend colleges with low faculty/student ratios get the most well-rounded education. As a result, when my children are ready to attend college, I'll be sure they attend a school with a very small student population.

Which of the following, if true, identifies the greatest flaw in the reasoning above?

- A. A low faculty/student ratio is the effect of a well-rounded education, not its source.
- B. Intelligence should be considered the result of childhood environment, not advanced education.
- C. A very small student population does not by itself, ensure a low faculty/student ratio.
- D. Parental desires and preferences rarely determine a child's choice of a college or university.
- E. Students must take advantage of the low faculty/student ratio by intentionally choosing small classes.

#### Answers and Explanations

You can download the answers and explanations on our [website](#) for FREE!



---

### Question 5

All German philosophers, except for Marx, are idealists.

From which of the following can the statement above be most properly inferred?


- A. Except for Marx, if someone is an idealist philosopher, then he or she is German.
- B. Marx is the only non-German philosopher who is an idealist.
- C. If a German is an idealist, then he or she is a philosopher, as long as he or she is not Marx.
- D. Marx is not an idealist German philosopher.
- E. Aside from the philosopher Marx, if someone is a German philosopher, then he or she is an idealist.

### Answers and Explanations

You can download the answers and explanations on our [website](#) for FREE!

# KAPLAN

## TEST PREP



### **GMAT Data Sufficiency Practice Questions**

***Directions: In each of the problems, a question is followed by two statements containing certain data. You are to determine whether the data provided by the statements is sufficient to answer the question.***

---

#### **Answer choices**

You can download the answers and explanations on our [website](#) for FREE!



---

### Question 1

Does  $x = y$ ?

- (1)  $x^2 - y^2 = 0$
- (2)  $(x - y)^2 = 0$

- A.
- B.
- C.
- D.
- E.

### Answer and Explanations

You can download the answers and explanations on our [website](#) for FREE!





## Question 2

If  $R$  is an integer, is  $R$  evenly divisible by 3?

- (1)  $2R$  is evenly divisible by 3
- (2)  $3R$  is evenly divisible by 3

- A.
- B.
- C.
- D.
- E.

## Answer and Explanations

You can download the answers and explanations on our [website](#) for FREE!



### Question 3

If he did not stop along the way, what speed did Bill average on his 3-hour trip?

- (1) He traveled a total of 120 miles.
- (2) He traveled half the distance at 30 miles per hour, and half the distance at 60 miles per hour.

- A.
- B.
- C.
- D.
- E.

**You can download the answers and explanations on our [website](#) for FREE!**

### Question 4

Is  $x + y$  positive?

- (1)  $x - y$  is positive.
- (2)  $y - x$  is negative.

- A.
- B.
- C.
- D.
- E.

### Answer and Explanations

You can download the answers and explanations on our [website](#) for FREE!

### Question 5

A shopper bought a tie and a belt during a sale. Which item did he buy at the greater dollar value?

- (1) He bought the tie at a 20 percent discount.
- (2) He bought the belt at a 25 percent discount


- A.
- B.
- C.
- D.
- E.

### Answer and Explanations

You can download the answers and explanations on our [website](#) for FREE!

# KAPLAN

## TEST PREP



### GMAT Reading Comprehension Practice Questions

**Answer the questions after reading through the passage. Base your answers on information that is either stated or implied in the passage.**

The rich analyses of Fernand Braudel and his fellow *Annales* historians have made significant contributions to historical theory and research. In a departure from traditional historical approaches, the *Annales* historians assume (as do Marxists) that history cannot be limited to a simple recounting of conscious human actions, but must be understood in the context of forces that underlie human behavior. Braudel was the first *Annales* historian to gain widespread support for the idea that history should synthesize data from social sciences, especially economics, to provide a broader historical view of human societies over time (although Febvre and Bloch, founders of the *Annales* school, originated this approach).

Braudel conceived of history as the dynamic interaction of three temporalities. The first of these, the *evenementielle*, involved short-lived dramatic "events," such as battles, revolutions, and the actions of great men, which had preoccupied traditional historians like Carlyle. *Conjonctures* was Braudel's term for the larger, cyclical processes that might last up to half a century. The *longue duree*, a historical wave of great length, was for Braudel the most fascinating of the three temporalities. Here he focused on those aspects of everyday life that might remain relatively unchanged for centuries. What people ate, what they wore, their means and routes of travel—for Braudel these things create "structures" that define the limits of potential social change for hundreds of years at a time.

Braudel's concept of the *longue duree* extended the perspective of historical space as well as time. Until the *Annales* school, historians had taken the juridical political unit—the the nation-state, duchy, or whatever—as their starting point. Yet, when such enormous time spans are considered, geographical features may have more significance for human populations than national borders. In his doctoral thesis, a seminal work on the Mediterranean during the reign of Philip II, Braudel treated the

# KAPLAN

## TEST PREP

geohistory of the entire region as a "structure" that exerted myriad influences on human lifeways since the first settlements on the shores of the Mediterranean Sea.

And so the reader is given such arcane information as the list of products that came to Spanish shores from North Africa, the seasonal routes followed by Mediterranean sheep and their shepherds, and the cities where the best ship timber could be bought.

Braudel has been faulted for the imprecision of his approach. With his Rabelaisian delight in concrete detail, Braudel vastly extended the realm of relevant phenomena; but this very achievement made it difficult to delimit the boundaries of observation, a task necessary to beginning any social investigation. Further, Braudel and other *Annales* historians minimize the differences among the social sciences. Nevertheless, the many similarly designed studies aimed at both professional and popular audiences indicate that Braudel asked significant questions which traditional historians had overlooked.



### Question 1

The primary purpose of the passage is to

- A. show how Braudel's work changed the conception of Mediterranean life held by previous historians.
- B. evaluate Braudel's criticisms of traditional and Marxist historiography
- C. contrast the perspective of the *longue duree* with the actions of major historical figures
- D. illustrate the relevance of Braudel's concepts to other social sciences
- E. outline some of Braudel's influential conceptions and distinguish them from conventional approaches

### Answers and Explanations

You can download the answers and explanations on our [website](#) for FREE!



---

## Question 2

The author refers to the work of Febvre and Bloch in order to

- A. illustrate the limitations of the *Annales* tradition of historical investigation
- B. suggest the relevance of economics to historical investigation
- C. debate the need for combining various sociological approaches
- D. show that previous *Annales* historians anticipated Braudel's focus on economics
- E. demonstrate that historical studies provide broad structures necessary for economic analysis

## Answers and Explanations

You can download the answers and explanations on our [website](#) for FREE!



### Question 3

According to the passage, all of the following are aspects of Braudel's approach to history EXCEPT that he

- A. attempted to unify various social sciences
- B. studied social and economic activities that occurred across national boundaries
- C. pointed out the link between increased economic activity and the rise of nationalism
- D. examined seemingly unexciting aspects of everyday life
- E. visualized history as involving several different time frames

### Answers and Explanations

You can download the answers and explanations on our [website](#) for FREE!



---

#### Question 4

The passage suggests that, compared to traditional historians, *Annales* historians are

- A. more interested in other social sciences than in history
- B. more critical of the achievements of famous historical figures
- C. more skeptical of the validity of most economic research
- D. more interested in the underlying context of human behavior provided by social structure
- E. more inclined to be dogmatic in their approach to history

#### Answers and Explanations

You can download the answers and explanations on our [website](#) for FREE!



---

## Question 5

The author is critical of Braudel's perspective for which of the following reasons?

- A. It seeks structures that underlie all forms of social activity.
- B. It assumes a greater similarity among the social sciences than actually exists.
- C. It fails to consider the relationship between short-term events and long-term social activity.
- D. It clearly defines boundaries for social analysis.
- E. It attributes too much significance to conscious human actions.

## Answers and Explanations

You can download the answers and explanations on our [website](#) for FREE!

# KAPLAN

## TEST PREP



### **GMAT Practice Questions – Answers and Explanations**

*Directions: Choose the best answer from the five answer choices.*

---

#### **Question 1**

A family pays \$800 per year for an insurance plan that pays 80 percent of the first \$1,000 in expenses and 100 percent of all medical expenses thereafter. In any given year, the total amount paid by the family will equal the amount paid by the plan when the family's medical expenses total.

- A. \$1,000
- B. \$1,200
- C. \$1,400
- D. \$1,800
- E. \$2,200

#### **Answer and Explanation**

**Y** You can download the answers and explanations on our [website](#) for FREE!



---

## Question 2

Cheese, bologna, and peanut butter sandwiches were made for a picnic in a ratio of 5 to 7 to 8. If a total of 120 sandwiches were made, how many bologna sandwiches were made?

- A. 15
- B. 30
- C. 38
- D. 42
- E. 48

## Answer and Explanation

You can download the answers and explanations on our [website](#) for FREE!

### Question 3

A sink contains exactly 12 liters of water. If water is drained from the sink until it holds exactly 6 liters of water less than the quantity drained away, how many liters of water were drained away?

- A. 2
- B. 3
- C. 4.5
- D. 6
- E. 9

### Answer and Explanation

You can download the answers and explanations on our [website](#) for FREE!



---

#### Question 4

Company C sells a line of 25 products with an average retail price of \$1,200. If none of these products sells for less than \$420, and exactly 10 of the products sell for less than \$1,000, what is the greatest possible selling price of the most expensive product?

- A. \$2,600
- B. \$3,900
- C. \$7,800
- D. \$11,800
- E. \$18,200

#### Answers and Explanations

You can download the answers and explanations on our [website](#) for FREE!



---

### Question 5

In a certain game, each player scores either 2 points or 5 points. If  $n$  players score 2 points and  $m$  players score 5 points, and the total number of points scored is 50, what is the least possible positive difference between  $n$  and  $m$ ?

- A. 1
- B. 3
- C. 5
- D. 7
- E. 9

### Answers & Explanations

You can download the answers and explanations on our [website](#) for FREE!



# KAPLAN

## TEST PREP



### **GMAT Sentence Correction Practice Questions**

***Directions: The following questions consist of sentences that are either partly or entirely underlined.***

***Select the answer choice that represents the best revision of the underlined text. Choice A duplicates the original version. If the original seems better than any of the revisions, then select it.***

---

#### **Question 1**

The concert this weekend promises to attract an even greater amount of people than attended the last one.

- A. an even greater amount of people
- B. an ever larger amount of people
- C. an amount of people even greater
- D. a number of people even larger
- E. an even greater number of people

#### **Answers and Explanations**

**You can download the answers and explanations on our [website](#) for FREE!**

---

### Question 2

Records of the first 736 British convicts deported to Australia reveal convictions for crimes against property in all cases and they ranged from highway robbery to forgery.

- A. convictions for crimes against property in all cases and they ranged
- B. convictions in all cases were crimes against property and ranging
- C. the ranging of convictions for crimes against property in all cases
- D. that all were convicted of crimes against property ranging
- E. that all of them had convictions for crimes that were against property; the range was

### Answers and Explanations

You can download the answers and explanations on our [website](#) for FREE!

### Question 3

Scoliosis, a condition when the spine curves abnormally and throws the body out of line, can cause heart and lung problems as well as physical deformity.

- A. a condition when the spine curves abnormally and throws the body out of line
- B. an abnormal curvature of the spine that throws the body out of line
- C. a condition of the spine curving abnormally and in which the body is thrown out of line
- D. where the body is thrown out of line by an abnormal curvature of the spine
- E. a condition of an abnormal curvature of the spine throwing the body out of line

### Answers and Explanations

You can download the answers and explanations on our [website](#) for FREE!



#### Question 4

Many of the thousands of students currently enrolled in night courses hope for the exchanging of their drab jobs for new careers that are challenging.

- A. for the exchanging of their drab jobs for new careers that are challenging
- B. for exchanging drab jobs for new careers that will challenge them
- C. to exchange their drab jobs with new careers that will be new and challenging
- D. to exchange their drab jobs for new and challenging careers
- E. to exchanging their drab jobs and find careers that will be new and challenging.

#### Answers and Explanations

You can download the answers and explanations on our [website](#) for FREE!

### Question 5

The public's widespread belief in the existence of UFOs and their general curiosity about extraterrestrial life has generated considerable interest in science fiction.

- A. UFOs and their general curiosity about extraterrestrial life has
- B. UFOs and they are generally curious about extraterrestrial life which has
- C. UFOs, as well as their general curiosity about extraterrestrial life, have
- D. UFOs, as well as its general curiosity about extraterrestrial life, has
- E. UFOs, as well as general curiosity about extraterrestrial life, have

### Answers and Explanations

You can download the answers and explanations on our [website](#) for FREE!