



---

## **Download SSC Stenographers Grade C & D Exam Paper (Held on 19<sup>th</sup> September 2014)**

---

**Exam Name: Stenographers Grade C & D**

**Year: 2014**

**Exam Date: 19<sup>th</sup> September 2014**

Time 2 hr.

No. of Questions 200

**Part-1 General Intelligence and Reasoning**

**Directions** (Q. Nos. 1-6) Select the related letter/wrod/ number from the given alternatives.

1. SILK : NDGF :: SOIL : ?  
a. NJDG                      b. RNHK  
c. NIBD                      d. NKFJ
  2. 7 : 47 :: 9 : ?  
a. 79    b. 94    c. 50    d. 81
  3. ACF : BDG :: EGI : ?  
a. BDF                      b. FHK  
c. EFG                      d. ADF
  4. ACEF : GIKL :: MOQR : ?  
a. SUWY                    b. TVXZ  
c. TUXY                    d. SUWX
  5. Lamp : Oil :: Electric bulb : ?  
a. Current                  b. Bright  
c. Holder                    d. Switch
  6. Poem : Poet :: ? : Book  
a. Editor                    b. Author  
c. Writer                    d. Publisher
- Directions** (Q. Nos. 7-12) Find the odd word/letter/number pair from the given alternatives.
7. a. Cricket                  b. Football  
c. Polo                      d. Hockey
  8. a. Tape Recorder  
b. TV  
c. Gramophone  
d. Radio
  9. a. CDFE                    b. RSTV  
c. JKML                    d. MNPO
  10. a. 46-54                    b. 71-17  
c. 31-13                    d. 79-97
  11. a. T14                      b. T18  
c. T12                      d. T21
  12. a. ARBT                    b. KVLW  
c. PXQY                    d. EPFQ

**Directions** (Q. Nos. 13-14) Which one of the given responses would be a meaningful order of the following?

13. (1) Classroom            (2) Desk  
(3) School                  (4) Community  
(5) Drawer  
a. (4), (2), (3), (1), (5)  
b. (3), (2), (4), (5), (1)  
c. (4), (3), (1), (2), (5)  
d. (1), (2), (3), (4), (5)
14. (1) Gold                    (2) Ornaments  
(3) Ore                        (4) Mine  
(5) Process  
a. (4), (3), (5), (1), (2)  
b. (4), (3), (5), (2), (1)  
c. (3), (4), (5), (1), (2)  
d. (2), (1), (5), (4), (3)

**Directions** (Q. Nos. 15-18) Choose the correct alternative from the given ones which will complete the series.

15. 8, 18, 32, 50, 72, ?  
a. 76    b. 98    c. 80    d. 70
16. BDZXFHVJTJ ???  
a. LRP                      b. LPR  
c. LRQ                      d. KRP
17. BXJ, ETL, HPN, KLP, ?  
a. MHQ                      b. MIP  
c. NIR                        d. NHR
18. 1331, 729, 343, 125, ?  
a. 27    b. 64    c. 216    d. 512
19. Given below are four words. Putting the letters in a different order, a new word is formed from each of those words. Identify the word in which there is an addition of a letter, while compared with the original word.  
(1) Shrub                    (2) Bleat  
(3) Meats                    (4) Votes  
a. Table                      b. Stoves  
c. Brush                      d. Steam
20. Praveen is twice as old as Roopa and 6 years older than Deepak. If Deepak is 12 years, how old is Roopa?  
a. 9    b. 8    c. 11    d. 6

21. If LPPHGLDWH means IMMEDIATE, what does GRPDLQ stand for?

- a. MATTER                      b. DOMAIN  
c. ORANGE                      d. DANGER

22. While travelling in a train with his friend, Rushil meets another man whose mother is the wife of Rushil's father's only son. How is the man related to Rushil?

- a. Son                              b. Father  
c. Uncle                            d. Nephew

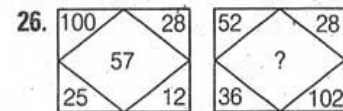
23. If SCHOOL is written as TBINPK, how TEACHER can be written in that code?

- a. UDBBIDS                      b. DUBBIDS  
c. NDBBISD                      d. SEIDIFDS

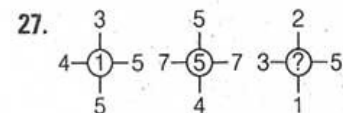
**Directions** (Q. Nos. 24-25) Some equations are solved on the basis of a certain system. On the same basis find out the correct answer from amongst the four alternatives for the unsolved equation in each question.

24. If p means -, q means +, r means ÷ and s means ×, then  $18p\ 6q\ 4s\ 6r\ 2 = ?$   
a. 24    b. 12    c. 26    d. 128
25. If  $9 - 8 - 7 = 876$ ,  $6 - 4 - 2 = 531$ , then  $8 - 5 - 3 = ?$   
a. 647    b. 741    c. 742    d. 572

**Directions** (Q. Nos. 26-28) Select the missing number from the given responses.



- a. 50                              b. 90  
c. 218                            d. 64



- a. 11                              b. 3  
c. 1                                d. 5

28. 5 7 4  
16 13 38  
3 5 ?  
7 4 6  
a. 6 b. 7 c. 9 d. 8
29. One morning after sunrise Manajit and Sangita were walking to each other face to face at the park. If Manajit's shadow was exactly to the right of Sangita, which direction Manajit was facing?  
a. South b. East c. West d. North
30. Jaffar starting from a fixed point goes 15 km towards North and then after turning to his right he goes 15 km. Then, he goes 10, 15 and 15 km after turning to his left each time. How far is he from his starting point?  
a. 10 km b. 20 km  
c. 15 km d. 5 km
31. In a class the students are standing in a row. A student is 11th from the right end and 9th from the left end. How many students are standing in that row?  
a. 19 b. 20 c. 21 d. 18
32. One morning Savita set out from home to fetch water in the direction of the Sun. After some time she turned to her left and then to her right. After some time she turned to her right again. Now which direction is she facing?  
a. South b. West c. East d. North

**Directions** (Q. Nos. 33-34) In the given questions two statements are given followed by two conclusions I and II. You have to consider the statements to be true, even if it seems to be at variance from commonly known facts. You are to decide which of the given conclusions can definitely be drawn from the given statements. Indicate your answer.

**33. Statements**

- I. Meena is older than Roma.  
II. Rashmi is older than Meena.  
III. Roma is older than Rashmi.

If Ist two statements are true then 3rd statement is

- a. false b. uncertain  
c. vague d. true

- 34. Statements** All athletes are brave.  
All girls are athletes.

**Conclusions**

- I. All girls are brave.  
II. Some athletes are girls.  
a. Only conclusion II follows.  
b. Both conclusion I and II follow.  
c. Neither conclusion I nor II follows.  
d. Only conclusion I follows.

**Directions** (Q. Nos 35-36) You are given the name of a town and a date followed by four alternatives. Of these, only one matches while the others have some mistakes. You are to choose exactly the same as the given one as your answer.

35. Aurangabad, September 19, 2009  
a. Aurangabad, September, 19 2009  
b. Aurangabad, 19 September, 2009  
c. Aurangabad, September 19, 2009  
d. Aurangabad, September, 19, 2009
36. Thiruvananthapuram, April 12, 2014  
a. Thiruvananthapuram, April 12, 2014  
b. Thiruvananthapuram, April 12, 2014  
c. Trivandrum, April 12, 2014  
d. Thiruvananthapuram, April 12th, 2014

**Directions** (Q. Nos. 37-38)

Answer the questions based on the following. Below are given some Roll Numbers of candidates registered at different centres for an examination. The first two digits from the left stand for the centre code and the next four for the serial number of the candidates registered at the centre.

061391 041631 031863 069234  
024268 046198 059721 011432  
051491 010028 020063 046452  
011432 050251 029378 040028

37. Which centres have serial number 0028 common?  
a. 01, 06 b. 02, 04  
c. 01, 04 d. 05, 01

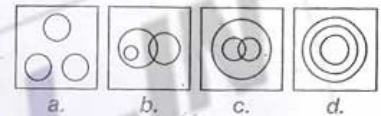
38. Which centre has the largest number of candidates?  
a. 06 b. 02 c. 05 d. 04

39. When you don't know how to proceed with an urgent official work, you will  
a. seek the help of your seniors who had already worked on it  
b. try to understand how to complete it  
c. work hard to complete it by time  
d. learn about it and complete the work

40. When I witness an accident, I  
a. will call the ambulance  
b. will panic  
c. will be one among the crowd and sympathise  
d. will pretend that I'm busy and rush

41. While speaking to an audience, you feel that  
a. it is difficult to convey your matter  
b. you are comfortable in conveying your matter  
c. you are partially comfortable in conveying your matter.  
d. you will do better with some more practice

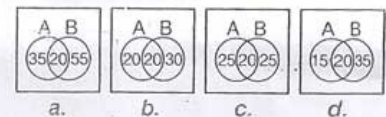
42. Either he is intelligent or industrious  
a. he is industrious  
b. an unintelligent person can be industrious  
c. he is not industrious  
d. he is intelligent
43. While having an argument with someone, if you fail  
a. wait for the next opportunity to beat your opponents  
b. agree to disagree with a part of the argument  
c. feel totally shaken  
d. analyse the reasons for the failure
44. Select the venn diagram that correctly shows the relationship. Continent : City : Country



45. In a total population of 70, if 20 drink coffee and tea, 35 drink coffee, then select the correct venn diagram that shows  
(1) how many drink only coffee?  
(2) how many drink only tea?

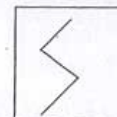
A = Coffee drinkers

B = Tea drinkers

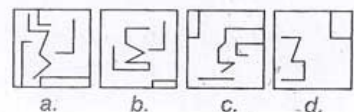


46. From the given answer figures, select the one in which the question figure is hidden/embedded.

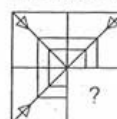
Question figure



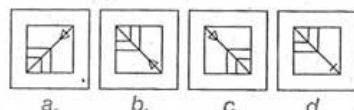
Answer figures



47. Which answer figure will complete the pattern in the question figure?



Answer figures



48. A word is represented by only one set of numbers as given in any one of the alternatives. The sets of numbers given in the alternatives are represented by two classes of alphabets as in the 2 matrices given below. The columns and rows of Matrix-I are numbered from 0 to 4 and that of Matrix-II from 5 to 9. A letter from these matrices can be represented first by its row and next by column number. For e.g., A can be represented by 12, 24 etc. R can be represented by 57, 76 etc. Identify the set for the given word. 'LAKE'

Matrix-I

	0	1	2	3	4
0	A	E	S	T	H
1	T	H	A	E	S
2	E	S	T	H	A
3	H	A	E	S	T
4	S	T	H	A	E

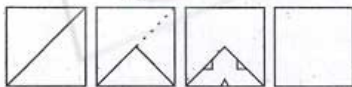
Matrix-II

	5	6	7	8	9
5	P	O	R	K	L
6	K	L	P	O	R
7	O	R	K	L	P
8	L	P	O	R	K
9	R	K	L	P	O

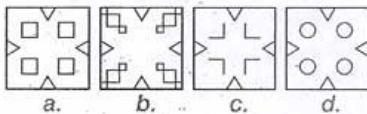
- a. 97, 00, 77, 12    b. 66, 12, 58, 40  
c. 77, 43, 76, 31    d. 85, 31, 77, 44

49. A piece of paper is folded and cut as shown below in the question figures. From the given answer figures, indicate how it will appear when opened.

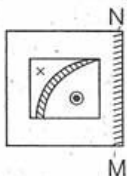
Question figures



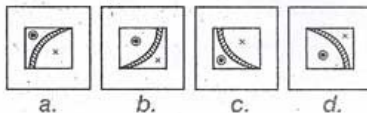
Answer figures



50. If a mirror is placed on the line MN, then which of the answer figures is the right image of the given figure?  
Question figure



Answer figures



51. Devaluation means  
a. reduction in the external value of currency  
b. fall in valuation of the essentials in an economy  
c. depreciation of the fixed assets  
d. increase in the currency value in terms of foreign currency
52. Disguised unemployment means  
a. willing to work and not getting the work  
b. not getting work on all days throughout the year  
c. insufficiency of capital structure to absorb the large labour force  
d. more people working, than required
53. The lines joining places of equal values of horizontal component of Earth's magnetic field are called  
a. isogonic lines  
b. isodynamic lines  
c. aclinic lines  
d. isoclinic lines
54. Free and compulsory education for all children is provided until they attain the age of  
a. 16 years    b. 18 years  
c. 21 years    d. 14 years
55. The Indian recipient of Noble Peace Prize is  
a. Hargovind Khurana  
b. Rabindra Nath Tagore  
c. Mother Teresa  
d. Amartya Sen
56. Which one among the following states is smallest in area?  
a. Gujarat    b. Karnataka  
c. Tamil Nadu    d. Andhra Pradesh
57. The '3 B's'-brokers, bankers and businessmen were responsible for  
a. The Great Depression  
b. Russian Revolution  
c. French Revolution  
d. First World War
58. The first Muslim Woman ruler of India was  
a. Chandabibi  
b. Sultana Raziya  
c. Begum Hazarat Mahal  
d. Noorjahan
59. Highest coffee growing state in India is  
a. Karnataka    b. Uttar Pradesh  
c. Maharashtra    d. Tamil Nadu
60. Red light is used in traffic signals, because  
a. colour of blood is red  
b. animals can identify red  
c. red light disperses least  
d. red is the symbol of danger

61. London is situated on the banks of river  
a. Tiber    b. Danube  
c. Tigris    d. Thames
62. Name the portfolio held by Sri Pranab Mukherjee before he was elevated as President of India  
a. Railway Minister  
b. Finance Minister  
c. External Affairs Minister  
d. Home Minister
63. ATM means  
a. All Time Money  
b. Automatic Teller Machine  
c. Automated Teller Machine  
d. Any Time Money
64. Identify the odd sportsman among the following  
a. Narain Karthikeyan  
b. Vijay Hazare  
c. Sachin Tendulkar  
d. Sunil Gavaskar
65. Which market forms allow free entry and exit of firms?  
a. Perfect and Monopolistic  
b. Perfect and Oligopoly  
c. Oligopoly and Monopoly  
d. Monopoly and Monopolistic
66. Which one of the following is used in making pencils?  
a. Charcoal    b. Bone black  
c. Black ash    d. Graphite
67. The bacteria capable of converting nitrite to nitrate is  
a. Nitrococcus    b. Nitrobacter  
c. Pseudomonas    d. Nitrosomonas
68. The rootless plant is  
a. lemna    b. banana  
c. ginger    d. lemon
69. Din-I-Ilahi was founded by  
a. Kabir    b. Akbar  
c. Shah Jahan  
d. Guru Nanak Dev
70. First Indian to make a speech in Hindi before the UN General Assembly was  
a. AB Vajpayee  
b. Lal Bahadur Shastri  
c. Lal Krishna Advani  
d. Morarji Desai
71. The highest peak of the Eastern ghats of India is  
a. Shevroy hills    b. Mahendragiri  
c. Javadi hills    d. Annaimudi
72. GNP differs from NNP due to  
a. net indirect taxes  
b. Direct taxes  
c. interest on public debt  
d. depreciation

73. Who addresses the joint sessions of the Parliament?  
a. The President  
b. The Prime Minister  
c. The Chairman of Rajya Sabha  
d. The Lok Sabha Speaker
74. DNA in a cell is a  
a. carboxylic acid  
b. nucleic acid  
c. amino acid  
d. fatty acid
75. Which of the following awards is given for excellence in sports coaching?  
a. Sahitya Academi Award  
b. Dronacharya Award  
c. Arjun Award  
d. Dada Saheb Phalke Award
76. The density of water is greater than the density of kerosene. If the two are mixed  
a. water floats on kerosene  
b. kerosene floats on water  
c. kerosene dissolves in water  
d. they mix uniformly
77. 'Purna Swaraj' was announced in the Indian National Congress Session of  
a. Calcutta  
b. Lahore  
c. Nagpur  
d. Karachi
78. Who chaired the Boundary Commission in 1947, to demarcate the boundary line between India and Pakistan?  
a. Krishna Menon  
b. McMohan  
c. J. Nehru  
d. Henderson Brooks
79. Ashoka embraced Buddhism  
a. before the Kalinga war  
b. after the Kalinga war  
c. just before his death  
d. when he was a Crown Prince
80. What kind of data can you send by e-mail?  
a. Audio  
b. Video  
c. Pictures  
d. All of these
81. Fundamental Rights are borrowed from the Constitution of  
a. America  
b. Ireland  
c. Australia  
d. Russia
82. Which country is the largest producer of raw Jute?  
a. Bangladesh  
b. Pakistan  
c. Myanmar  
d. India
83. Who is the winner of the prestigious Man Booker Prize 2013?  
a. Haruki Murakami  
b. Eleanor Catton  
c. Malala Yousufzai  
d. Vikram Seth
84. The medicinal plant used in preparations for skin care is  
a. cinchona  
b. amla  
c. aloevera  
d. rauwolfia
85. Soda ash is the name for  
a. sodium hydroxide  
b. anhydrous sodium carbonate  
c. sodium bicarbonate  
d. hydrated sodium carbonate
86. Banana is a  
a. tree  
b. herb  
c. undershrub  
d. shrub
87. Where is the permanent secretariat of the SAARC?  
a. New Delhi  
b. Islamabad  
c. Colombo  
d. Kathmandu
88. Gas used for artificial ripening of fruits is  
a. Ethane  
b. Acetylene  
c. Propane  
d. Methane
89. The characteristic of sound which distinguishes a female voice from a male voice is called  
a. pitch  
b. phase  
c. quality  
d. loudness
90. Who has recently been appointed the Chief Economist and Senior Vice-President of the World Bank?  
a. Justin Yifu Lin  
b. Kaushik Basu  
c. Jagdish Bhagwati  
d. Raghuram Rajan
91. 'Statue of Liberty' is the National Emblem of  
a. UK  
b. USA  
c. Germany  
d. Russia
92. Which one of the following is an example of joint supply?  
a. Petrol and Bus  
b. Ink and Fountain Pen  
c. Sugar and Coffee  
d. Wool and Cotton
93. Seeds are not enclosed in fruits is  
a. angiosperms  
b. dicotyledons  
c. monocotyledons  
d. gymnosperms
94. Sahara Desert is in the continent of  
a. Europe  
b. America  
c. Africa  
d. Asia
95. Ozone Day is celebrated on  
a. April 21  
b. September 16  
c. September 25  
d. June 5
96. Deficiency of which vitamin causes beri-beri?  
a. Vitamin-B<sub>6</sub>  
b. Vitamin-B<sub>2</sub>  
c. Vitamin-B<sub>12</sub>  
d. Vitamin-B<sub>1</sub>
97. Which of the following is **not** a waste product produced by plants?  
a. Water vapour  
b. Oxygen  
c. Gum Arabic  
d. Carbon dioxide
98. Water is an excellent solvent because its molecules are  
a. highly polar  
b. non-polar  
c. light weight  
d. neutral
99. Kolkata Knight Riders defeated which of the following teams in the final match of IPL-7 on June 1, 2014?  
a. Chennai Super Kings  
b. Delhi Daredevils  
c. Kings XI Punjab  
d. Sun Risers Hyderabad
100. Which of the following is usually **not** an air pollutant?  
a. Sulphur dioxide  
b. Carbon dioxide  
c. Nitrous oxide  
d. Hydrocarbons

### Part-3 English Language and Comprehension

**Directions** (Q. Nos. 101-110) In following questions, some part of the sentences have errors and some are correct. Find out which part of a sentence has an error.

101. Every boy a. / have to submit the assignment b. / by this evening c. / No error d.
102. It is high time a. / that you b. / go home c. / No error d.
103. I saw portion a. / of the manuscript b. / on birds c. / No error d.
104. I had worked very hard a. / on this project b. / and my boss was not satisfied c. / No error d.
105. She invited a. / all her daughter-in-laws b. / to the grand party last week c. / No error d.
106. The art exhibition a. / is a big hit b. / and they made a lot of profit c. / No error d.
107. The students a. / were playing b. / besides the school building c. / No error d.
108. Profit is divided a. / between the five shareholders b. / of the company c. / No error d.
109. It is clear that a. / each of the tricks b. / is a sort of defensive mechanism c. / No error d.
110. My furniture a. / has been damaged b. / in transit c. / No error d.

187. A good nutrition is essential in the first four years of a child's life because
- At four years there is no further increase of the brain
  - At four years the brain weighs 99%
  - At four years the child's brain is the size of an adult's
  - At four years the brain is fully developed
188. The theme of the passage is
- Experiments on human beings
  - Growth of the brain
  - Malnutrition and its effect
  - Permanent brain damage
189. Find out the word in the passage, which means very important
- Alarming
  - Nevertheless
  - Conducted
  - Crucial
190. The meaning of 'irreversible' is
- irrelevant
  - changed
  - unchangeable
  - altered

**Passage II (Q. Nos. 191-195)**

When he heard that a Dutch inventor had invented something called a spyglass, but was keeping it a secret, Galileo Galilei decided to work on one of his own. Within 4 hours, he had invented a telescope that could magnify things to make them appear ten times larger than real life.

One night, he pointed his telescope towards the sky, and made his first of many space observations : the moon was not smooth, like everyone thought. The moon was covered with bumps and craters. As technology has improved, many others, have made improvements on the telescope, he wonderful device that allows us to see from a distance.

191. What is the main theme of the passage?
- Galileo and modern technology
  - Galileo and the Dutch inventor
  - Galileo and the spyglass
  - Galileo and his telescope
192. What was Galileo's observation of the moon?
- Its surface was both smooth and rough
  - Its surface was covered with bumps and craters
  - Its surface was bright and beautiful
  - Its surface was smooth
193. What is the basic definition of a telescope?
- A device that allows us to spy on things
  - A device that minimizes objects
  - A device that shows multiple objects
  - A device that magnifies distant objects
194. What was the inspiration for Galileo's telescope?
- A Dutch inventor's spyglass
  - A Dutch inventor's magnifying glass
  - A Dutch inventor's modern device
  - A Dutch inventor's telescope
195. Give a synonym for 'improvements'.
- Developments
  - Discoveries
  - Decisions
  - Inventions

**Passage III (Q. Nos. 196-200)**

Dance involves our sense of rhythm. We have an innate sense of rhythm in us. From the time we are in our mother's womb, the rhythmic rocking we feel as she walks awakens our instinct of movement. As babies, we are rocked to sleep. As children, we sing nursery rhymes and clap or dance along to them.

We have already begun dancing. In many countries, dance is indulged in to cultivate discipline and appreciation for one's native culture. For instance, in Africa, many tribes initiate their children into adulthood through dance. When we have mastered walking, we learn the rudimentary steps of dance. From there, we are able to choreograph other steps suited to the message we wish to convey. Ironically, we are able to be spontaneous in the midst of discipline.

196. Why is dance taught in many countries?
- to gain applause
  - to cultivate discipline and appreciation of one's culture
  - to master walking
  - to attain importance in society
197. What is the main theme of the passage?
- Dance teaching discipline
  - African dances
  - Dancing to nursery rhymes
  - Dance and its importance in life and society
198. What is the meaning of the word 'rudimentary'?
- Secondary
  - Tertiary
  - Basic
  - Final
199. When is the human being first associated with rhythm?
- During his/her initiation to adulthood
  - When a baby is rocked to sleep
  - In the mother's womb
  - In a ballet class
200. Give a synonym for 'spontaneous'.
- Spendthrift
  - Quick
  - Instinctive
  - Unnatural



- ➔ Medium: English and Hindi
- ➔ 100% Syllabus Covered
- ➔ Previous Years Papers



For More Details Call Course Director : +91 8800734161, 011-45151781

## **Study Kits for Staff Selection Commission Exams**

- ✓ Study Kit for SSC CGL EXAM (Tier-I)  
<http://sccportal.in/community/study-kit/cgl>
- ✓ Study Kit for SSC Combined Graduate Level Examination (Tier - II)  
<http://sccportal.in/community/study-kit/cgl-tier-2>
- ✓ Study Kit for Combined Higher Secondary Level (10+2) Examination  
<http://sccportal.in/community/study-kit/chsle>
- ✓ कर्मचारी चयन आयोग संयुक्त स्नातक स्तरीय परीक्षा (स्तर :-1) स्टडी किट  
<http://sccportal.in/community/study-kit/cgl/tier-1-hindi>
- ✓ Study Kit For SSC MTS Examination  
<http://sccportal.in/community/study-kit/mts>
- ✓ Study Kit For Prasar Bharti Examination  
<http://sccportal.in/community/study-kit/prasar-bharti-exam>
- ✓ Study Kit for Central Armed Police Forces (CAPFs) Examination  
<http://sccportal.in/community/study-kit/capfs>
- ✓ Study Kit For Sub Inspector in Delhi Police & CAPFs, CISF (Paper-1)  
<http://sccportal.in/community/study-kit/si-delhi-police-capf>
- ✓ Study Kit of English Language & Comprehension For All SSC Exam  
<http://sccportal.in/community/study-kit/english-language-comprehension-for-all-ssc-exam>
- ✓ Study Kit For Postal Assistant Examination  
<http://sccportal.in/community/study-kit/postal-assistant>

**For More Information Click Given below link:**

<http://sccportal.in/community/study-kit>

## ONLINE COACHING FOR SSC CGL EXAMS



- ✓ 24x7 E-learning Access
- ✓ 100% Syllabus Covered
- ✓ at just 100 Rs.per month
- ✓ Discussion Forum, Chat
- ✓ Telephonic Support



**Register Now**

**FREE TRIAL 7 DAY**

**SSCPORTAL.IN**  
India's Largest Online Community for SSC CGL, Staff Exams

### SSC CGL Exams Online Coaching (Starting at just Rs.100 per month) - English & Hindi Medium

⇒ Online Crash Course for SSC CGL Tier-1 Exam

<http://sscportal.in/community/courses/crash-course-for-cgl-tier-1>

⇒ एसएससी सीजीएल SSC CGL (Tier-1) हिन्दी माध्यम ऑनलाइन कोचिंग

<http://sscportal.in/community/courses/ssc-cgl-tier-1-hindi>

**For More Information Click Given below link:**

<http://sscportal.in/community/courses>