

ARCHITECTURE (CET) TEST PAPERS



Student Name _____

Date _____

Centre _____

Architecture Paper No.: 1

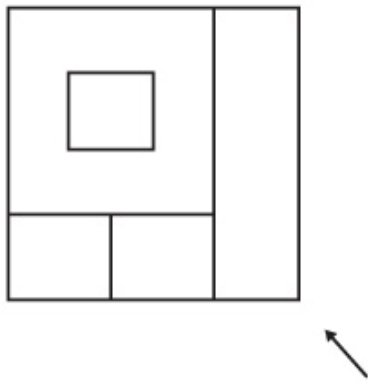
Total marks: - 100

Time: - 3 hrs.

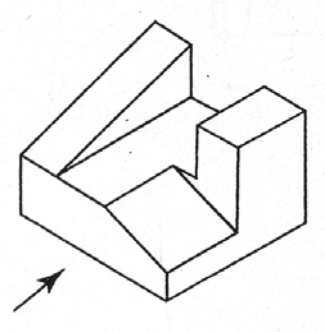
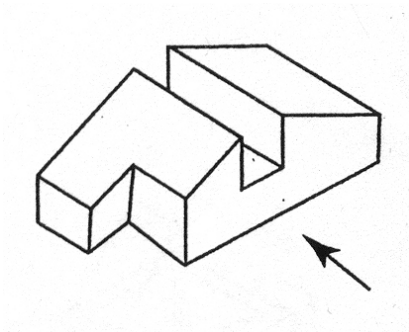
• **Aesthetic Sensitivity 50 marks**

Q1. Make Isometric view given direction
marks

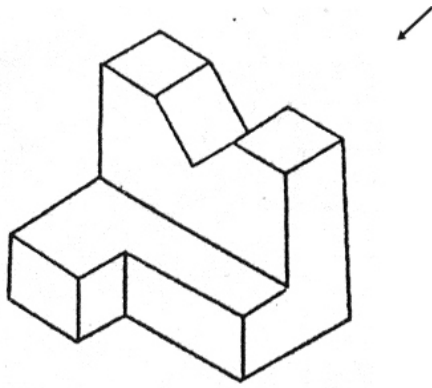
10



Q2. Given 3-D object make a drawing of one face given direction
10 marks



Q3. Make Isometric shadow from given direction
15 marks




Q4. Use the given forms and construct a balance structure give Shade & Light 15 marks

- 3 Cubes, 2 Cylinders, 4 Cuboids & 1 Cone
- **Drawing 50 marks**

Design

Given figure enlarge two times and colour the drawing
20 marks



Memory Drawing

marks

Given theme draw memory drawing & shade with pencil

Theme: - College canteen