

**AIPMT 2010**  
**PRELIM EXAMINATION**

**BIOLOGY**

**Q. 1.** An element playing important role in nitrogen fixation is :

1. Molybdenum
2. Copper
3. Manganese
4. Zinc

**Answer: (1)**

**Q. 2.** Select the correct statement from the ones given below:

1. Barbiturates when given to criminals make them tell the truth
2. Morphine is often given to persons who have undergone surgery as a pain killer.
3. Chewing tobacco lowers blood pressure and heart rate
4. Cocaine is given to patients after surgery as it stimulates recovery

**Answer: (2)**

**Q. 3.** Listed below are four respiratory capacities (a – d) and four jumbled respiratory volumes of a normal human adult: Respiratory capacities  
Respiratory volumes.

1. Residual volume 2500 mL
2. Vital capacity 3500 mL
3. Inspiratory reserve volume 1200 mL
4. Inspiratory capacity 4500 mL

Which one of the following is the correct matching of two capacities and volumes?

1. (b) 2500 mL, (c) 4500 mL
2. (c) 1200 mL, (d) 2500 mL
3. (d) 3500 mL, (a) 1200 mL
4. (a) 4500 mL, (b) 3500 mL

**Answer: (3)**

**Q. 4.** Transfer of pollen grains from the anther to the stigma of another flower of the same plant is called:

1. Xenogamy
2. Geitonogamy
3. Karyogamy
4. Autogamy

**Answer: (2)**

**Q. 5.** ABO blood groups in humans are controlled by the gene I. It has three alleles –  $I^A$ ,  $I^B$  and i. Since there are three different alleles, six different genotypes are possible. How many phenotypes can occur?

1. Three
2. One
3. Four
4. Two

**Answer: (3)**

**Q. 6.** Low  $Ca^{++}$  in the body fluid may be the cause of:

1. Tetany
2. Anaemia
3. Angina pectoris
4. Gout

**Answer: (1)**

**Q. 7.** The nerve centres which control the body temperature and the urge for eating recontained in:

1. Hypothalamus
2. Pons
3. Cerebellum
4. Thalamus

**Answer: (1)**

**Q. 8.** During mitosis ER and nucleolus begin to disappear at:

1. Late prophase
2. Early metaphase

3. Late metaphase
4. Early prophase


**Answer: (1)**

**Q. 9.** Darwin's finches are a good example of:

1. Industrial melanism
2. Connecting link
3. Adaptive radiation
4. Convergent evolution


**Answer: (3)**

**Q. 10.** Which stages of cell division do the following figures A and B represent respectively?



**A**

Fig. A



**B**

Fig. B

1. Metaphase – Telophase
2. Telophase minus; Metaphase
3. Late Anaphase – Prophase
4. Prophase – Anaphase

**Answer: (3)**

**Q. 11.** The common nitrogen-fixer in paddy fields is:

1. Rhizobium
2. Azospirillum
3. Oscillatoria
4. Frankia

**Answer: (2)**

**Q. 12.** Which two of the following changes (a – d) usually tend to occur in the plain dwellers when they move to high altitudes (3,500 m or more)?

1. Increase in red blood cell size
  2. Increase in red blood cell production
  3. Increased breathing rate
  4. Increase in thrombocyte count
- Changes occurring are :
- (1) (b) and (c) (2) (c) and (d) (3) (a) and (d) (4) (a) and (b)

**Answer: (1)**

**Q. 13.** What is true about RBCs in humans?

1. They carry about 20 – 25 per cent of CO<sub>2</sub>
2. They transport 99.5 per cent of O<sub>2</sub>
3. They transport about 80 per cent oxygen only and the rest 20 per cent of it is transported in dissolved state in blood plasma
4. They do not carry CO<sub>2</sub> at all

**Answer: (1)**

**Q. 14.** The main arena of various types of activities of a cell is:

1. Plasma membrane
2. Mitochondrion
3. Cytoplasm
4. Nucleus

**Answer: (3)**

**Q. 15.** If for some reason our goblet cells are non-functional, this will adversely affect:

1. production of somatostatin
2. secretion of sebum from the sebaceous glands
3. maturation of sperms
4. smooth movement of food down the intestine

**Answer: (4)**

**Q. 16.** The plasma membrane consists mainly of:

1. phospholipids embedded in a protein bilayer
2. proteins embedded in a phospholipid bilayer
3. proteins embedded in a polymer of glucose molecules

4. proteins embedded in a carbohydrate bilayer

**Answer: (2)**

**Q. 17.** The scutellum observed in a grain of wheat or maize is comparable to which part of the seed in other monocotyledons?

1. Cotyledon
2. Endosperm
3. Aleurone layer
4. Plumule

**Answer: (1)**

**Q. 18.** The energy – releasing metabolic process in which substrate is oxidised without an external electron acceptor is called:

1. Glycolysis
2. Fermentation
3. Aerobic respiration
4. Photorespiration

**Answer: (1)**

**Q. 19.** Photoperiodism was first characterised in:

1. Tobacco
2. Potato
3. Tomato
4. Cotton

**Answer: (1)**

**Q. 20 .** The second maturation division of the mammalian ovum occurs:

1. Shortly after ovulation before the ovum makes entry into the Fallopian tube
2. Until after the ovum has been penetrated by a sperm
3. Until the nucleus of the sperm has fused with that of the ovum
4. in the Graafian follicle following the first maturation division

**Answer: (2)**

**Q. 21.** Satellite DNA is useful tool in:

1. Organ transplantation
2. Sex determination

3. Forensic science
4. Genetic engineering

**Answer: (3)**

**Q. 22.** Which one of the following does not follow the central dogma of molecular biology?

1. Pea
2. Mucor
3. Chlamydomonas
4. HIV

**Answer: (4)**

**Q. 23.** Which one of the following statements about human sperm is correct?

1. Acrosome has a conical pointed structure used for piercing and penetrating the egg, resulting in fertilisation
2. The sperm lysins in the acrosome dissolve the egg envelope facilitating fertilisation
3. Acrosome serves as a sensory structure leading the sperm towards the ovum
4. Acrosome serves no particular function.

**Answer: (2)**

**Q 24.** The genetically-modified (GM) brinjal in India has been developed for:

1. Insect-resistance
2. Enhancing shelf life
3. Enhancing mineral content
4. Drought-resistance

**Answer: (1)**

**Q. 25.** Apomictic embryos in citrus arise from:

1. Synergids
2. Maternal sporophytic tissue in ovule
3. Antipodal cells
4. Diploid egg

**Answer: (2)**

**Q. 26.** One example of animals having a single opening to the outside that serves both as mouth as well as anus is:

1. Octopus
2. Asterias
3. Ascidia
4. Fasciola

**Answer: (3)**

**Q. 27.** Membrane-bound organelles are absent in :

1. Saccharomyces
2. Streptococcus
3. Chlamydomonas
4. Plasmodium

**Answer: (2)**

**Q. 28.** Keel is characteristic of the flowers of :

1. Gulmohur
2. Cassia
3. Calotropis
4. Bean

**Answer: (4)**

**Q. 29.** The kind of epithelium which forms the inner walls of blood vessels is :

1. cuboidal epithelium
2. columnar epithelium
3. ciliated columnar epithelium
4. squamous epithelium

**Answer: (4)**

**Q .30.** Which one of the following has its own DNA?

1. Mitochondria
2. Dictyosome
3. Lysosome
4. Peroxisome

**Answer: (1)**

**Q .31.** Select the correct statement from the following:

1. Biogas is produced by the activity of aerobic bacteria on animal waste

2. Methanobacterium is an aerobic bacterium found in rumen of cattle
3. Biogas, commonly called gobar gas, is pure methane
4. Activated sludge-sediment in settlement tanks of sewage treatment plant is a rich source of aerobic bacteria

**Answer : (4)**

because small amounts are used as inoculum in secondary treatment or biological treatment stage of sewage treatment.

**Q .32.** Study the four statements (a – d) given below and select the two correct ones out of them:

1. A lion eating a deer and a sparrow feeding on grain are ecologically similar in being consumers
2. Predator star fish Pisaster helps in maintaining species diversity of some invertebrates
3. Predators ultimately lead to the extinction of prey species.
4. Production of chemicals such as nicotine, strychnine by the plants are metabolic disorders

The two correct statements are:

1. (b) and (c)
2. (c) and (d)
3. (a) and (d)
4. (a) and (b)

**Answer: (4)**

**Q .33.** Breeding of crops with high levels of minerals, vitamins and proteins is called:

1. Somatic hybridisation
2. Biofortification
3. Biomagnification
4. Micropropagation

**Answer: (2)**

**Q .34.** Widal test is used for the diagnosis of:

1. Malaria
2. Pneumonia
3. Tuberculosis
4. Typhoid



**Answer: (4)**

**Q. 35.** In vitro fertilisation is a technique that involves transfer of which one of the following into the fallopian tube?

1. Embryo only, upto 8 cell stage
2. Either zygote or early embryo upto 8 cell stage
3. Embryo of 32 cell stage
4. Zygote only

**Answer: (1)**

because the embryo is introduced into fallopian tube.

**Q. 36.** Which one of the following structures between two adjacent cells is an effective transport pathway?

1. Plasmodesmata
2. Plastoquinones
3. Endoplasmic reticulum
4. Plasmalemma

**Answer: (1)**

**Q. 37.** Single-celled eukaryotes are included in:

1. Protista
2. Fungi
3. Archaea
4. Monera

**Answer: (1)**

**Q. 38.** In unilocular ovary with a single ovule the placentation is :

1. Marginal
2. Basal
3. Free Central
4. Axile

**Answer: (2)**

**Q. 39.** Sertoli cells are found in:

1. ovaries and secrete progesterone
2. adrenal cortex and secrete adrenaline

3. seminiferous tubules and provide nutrition to germ cells
4. pancreas and secrete cholecystokinin

**Answer: (3)**

**Q. 40.** Which one of the following cannot be explained on the basis of Mendel's Law of Dominance?

1. The discrete unit controlling a particular character is called a factor
2. Out of one pair of factors one is dominant, and the other recessive
3. Alleles do not show any blending and both the characters recover as such in F<sub>2</sub> generation.
4. Factors occur in pairs

**Answer: (3)**

**Q. 41.** The chief water conducting elements of xylem in gymnosperms are:

1. Vessels
2. Fibres
3. Transfusion tissue
4. Tracheids

**Answer: (4)**

**Q. 42.** Ringworm in humans is caused by :

1. Bacteria
2. Fungi
3. Nematodes
4. Viruses

**Answer: (2)**

**Q. 43.** Which one of the following is not a micronutrient?

1. Molybdenum
2. Magnesium
3. Zinc
4. Boron.

**Answer: (2)**

**Q. 44.** Vasa efferentia are the ductules leading from:

1. Testicular lobules to rete testis

2. Rete testis to vas deferens
3. Vas deferens to epididymis
4. Epididymis to urethra

**Answer: (2)**

**Q. 45.** Select the two correct statements out of the four (a – d) given below about lac operon.

1. Glucose or galactose may bind with the repressor and inactivate it
2. In the absence of lactose the repressor binds with the operator region
3. The z-gene codes for permease
4. This was elucidated by Francois Jacob and Jacque Monod

The correct statements are:

1. (b) and (c)
2. (a) and (c)
3. (b) and (d)
4. (a) and (b)

**Answer: (3)**

**Q. 46.** The genotype of a plant showing the dominant phenotype can be determined by :

1. Test cross
2. Dihybrid cross
3. Pedigree analysis
4. Back cross

**Answer: (1)**

**Q. 47.** PGA as the first CO<sub>2</sub> fixation product was discovered in photosynthesis of:

1. Bryophyte
2. Gymnosperm
3. Angiosperm
4. Alga

**Answer: (4)**

**Q. 48.** Seminal plasma in human males is rich in :

1. fructose and calcium
2. glucose and calcium
3. DNA and testosterone
4. ribose and potassium

**Answer: (1)**

**Q. 49.** A common biocontrol agent for the control of plant diseases is :

1. Baculovirus
2. Bacillus thuringiensis
3. Glomus
4. Trichoderma

**Answer: (4)**

**Q. 50.** Injury to adrenal cortex is not likely to affect the secretion of which one of the following?

1. Aldosterone
2. Both Androstenedione and Dehydroepiandrosterone
3. Adrenaline
4. Cortisol

**Answer: (3)**

**Q. 51.** Which one of the following pairs is incorrectly matched?

1. Glucagon – Beta cells (source)
2. Somatostatin – Delta cells (source)
3. Corpus luteum – Relaxin (secretion)
4. Insulin – Diabetes mellitus (disease)

**Answer: (1)**

**Q. 52.** Select the correct statement from the ones given below with respect to dihybrid cross.

1. Tightly linked genes on the same chromosome show higher recombinations
2. Genes far apart on the same chromosome show very few recombinations
3. Genes loosely linked on the same chromosome show similar recombinations as the tightly linked ones
4. Tightly linked genes on the same chromosome show very few recombinations.

**Answer: (4)**

**Q. 53.** Which one of the following statements in regard to the excretion by the human kidneys is correct?

1. Descending limb of Loop of Henle is impermeable to water
2. Distal convoluted tubule is incapable of reabsorbing  $\text{HCO}_3^-$

3. Nearly 99 per cent of the glomerular filtrate is reabsorbed by the renal tubules
4. Ascending limb of Loop of Henle is impermeable to electrolytes

**Answer: (3)**

**Q. 54.** The biomass available for consumption by the herbivores and the decomposers is called :

1. Net primary productivity
2. Secondary productivity
3. Standing crop
4. Gross primary productivity

**Answer: (1)**

**Q. 55.** If due to some injury the chordae tendinae of the tricuspid valve of the human heart is partially non-functional, what will be the immediate effect?

1. The flow of blood into the aorta will be slowed down
2. The 'pacemaker' will stop working
3. The blood will tend to flow back into the left atrium
4. The flow of blood into the pulmonary artery will be reduced

**Answer: (4)**

**Q. 56.** Ovary is half-inferior in the flowers of :

1. Guava
2. Plum
3. Brinjal
4. Cucumber

**Answer: (2)**

**Q. 57.** Which one of the following is used as vector for cloning genes into higher organisms ?

1. Baculovirus
2. Salmonella typhimurium
3. Rhizopus nigricans
4. Retrovirus

**Answer: (4)**

**Q. 58.** The one aspect which is not a salient feature of genetic code, is its being:

1. Degenerate
2. Ambiguous
3. Universal
4. Specific

**Answer: (2)**

**Q. 59.** Which one of the following is an example of ex-situ conservation?

1. Wildlife sanctuary
2. Seed bank
3. Sacred groves
4. National park

**Answer: (2)**

**Q. 60.** Which one of the following palindromic base sequences in DNA can be easily cut at about the middle by some particular restriction enzyme?

1. 5' ————— CGTTCG ————— 3'  
3' ————— ATGGTA ————— 5'
2. 5' ————— GATATG ————— 3'  
3' ————— CTAATA ————— 5'
3. 5' ————— GAATTC ————— 3'  
3' ————— CTTAAG ————— 5'
4. 5' ————— CACGTA ————— 3'  
3' ————— CTCAGT ————— 5'

**Answer: (3)**

**Q. 61.** Which one of the following statements is correct with respect to AIDS?

1. The HIV can be transmitted through eating food together with an infected person
2. Drug addicts are least susceptible to HIV infection
3. AIDS patients are being fully cured cent per cent with proper care and nutrition
4. The causative HIV retrovirus enters helper T-lymphocytes thus reducing their numbers.

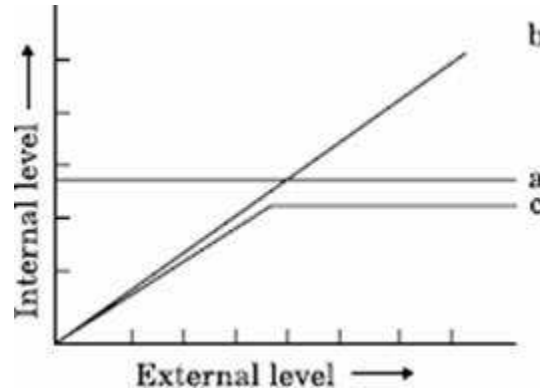
**Answer: (4)**

**Q. 62.** Phototropic curvature is the result of uneven distribution of :

1. Gibberellin
2. Phytochrome
3. Cytokinins
4. Auxin

**Answer: (4)**

**Q. 63.** The Figure given below is a diagrammatic representation of response of organisms to abiotic factors. What do a, b and c represent respectively?



- | (a)                  | (b)               | (c)               |
|----------------------|-------------------|-------------------|
| 1) conformer         | regulator         | partial regulator |
| 2) regulator         | partial regulator | conformer         |
| 3) partial regulator | regulator         | conformer         |
| 4) regulator         | conformer         | partial regulator |

**Answer: (4)**

**Q. 64.** Male and female gametophytes are independent and free-living in:

1. Mustard
2. Castor
3. Pinus
4. Sphagnum

**Answer: (4)**

**Q. 65.** The technical term used for the androecium in a flower of China rose (*Hibiscus rosasinensis*) is:

1. Monadelphous

2. Diadelphous
3. Polyandrous
4. Polyadelphous

**Answer: (1)**

**Q. 66.** Virus envelope is known as:

1. Capsid
2. Virion
3. Nucleoprotein
4. Core

**Answer: (1)**

**Q. 67.** The permissible use of the technique amniocentesis is for:

1. detecting sex of the unborn foetus
2. artificial insemination
3. transfer of embryo into the uterus of the surrogate mother
4. detecting any genetic abnormality

**Answer: (4)**

**Q. 68.** One of the free-living, anaerobic nitrogen-fixer is:

1. Beijernickia
2. Rhodospirillum
3. Rhizobium
4. Azotobacter

**Answer: (2)**

**Q. 69.** DNA or RNA segment tagged with a radioactive molecule is called:

1. Vector
2. Probe
3. Clone
4. Plasmid

**Answer: (2)**

**Q. 70.** The signals for parturition originate from:

1. placenta only
2. placenta as well as fully developed foetus



3. oxytocin released from maternal pituitary
4. fully developed foetus only

**Answer: (2)**

**Q. 71.** The principal nitrogenous excretory compound in humans is synthesised:

1. in kidneys but eliminated mostly through liver
2. in kidneys as well as eliminated by kidneys
3. in liver and also eliminated by the same through bile
4. in the liver, but eliminated mostly through kidneys





**Answer: (4)**

**Q. 72.** Carrier ions like  $\text{Na}^+$  facilitate the absorption of substances like:

1. amino acids and glucose
2. glucose and fatty acids
3. fatty acids and glycerol
4. fructose and some amino acids

**Answer: (1)**

**Q. 73.** Which one of the following symbols and its representation, used in human pedigree analysis is correct?

1.  = mating between relatives
2.  = unaffected male
3.  = unaffected female
4.  = male affected

**Answer: (1)**

**Q. 74.** Toxic agents present in food which interfere with thyroxine synthesis lead to the development of:

1. toxic goitre
2. cretinism
3. simple goitre
4. thyrotoxicosis

**Answer: (3)**

**Q. 75.** Which one of the following statements about all the four of Spongilla, Leech, Dolphin and Penguin is correct?

1. Penguin is homiothermic while the remaining three are poikilothermic
2. Leech is a fresh water form while all others are marine
3. Spongilla has special collared cells called choanocytes, not found in the remaining three
4. All are bilaterally symmetrical

**Answer: (3)**

**Q. 76.** The first movements of the foetus and appearance of hair on its head are usually observed during which month of pregnancy?

1. Fourth month
2. Fifth month
3. Sixth month
4. Third month

**Answer: (2)**

**Q. 77.** Which one of the following kinds of animals are triploblastic?

1. Flat worms
2. Sponges
3. Ctenophores
4. Corals

**Answer: (1)**

**Q. 78.** Which one of the following statements about certain given animals is correct?

1. Round worms (Aschelminthes) are pseudocoelomates
2. Molluscs are acoelomates
3. Insects are pseudocoelomates
4. Flat worms (Platyhelminthes) are coelomates

**Answer: (1)**

**Q. 79.** Cu ions released from copper – releasing Intra Uterine Devices (IUDs):

1. make uterus unsuitable for implantation
2. increase phagocytosis of sperms
3. suppress sperm motility

4. prevent ovulation

**Answer: (3)**

**Q. 80.** Restriction endonucleases are enzymes which:

1. make cuts at specific positions within the DNA molecule
2. recognize a specific nucleotide sequence for binding of DNA ligase
3. restrict the action of the enzyme DNA polymerase
4. remove nucleotides from the ends of the DNA molecule

**Answer: (1)**

**Q. 81.** Which one of the following is not a lateral meristem?

1. Intrafascicular cambium
2. Interfascicular cambium
3. Phellogen
4. Intercalary meristem

**Answer: (4)**

**Q. 82.** A renewable exhaustible natural resource is:

1. Coal
2. Petroleum
3. Minerals
4. Forest

**Answer: (4)**

**Q. 83.**  $C_4$  plants are more efficient in photosynthesis than  $C_3$  plants due to:

1. Higher leaf area
2. Presence of larger number of chloroplasts in the leaf cells
3. Presence of thin cuticle
4. Lower rate of photorespiration

**Answer: (4)**

**Q. 84.** Algae have cell wall made up of:

1. Cellulose, galactans and mannans
2. Hemicellulose, pectins and proteins
3. Pectins, cellulose and proteins
4. Cellulose, hemicellulose and pectins

**Answer: (1)**

**Q. 85.** Some hyperthermophilic organisms that grow in highly acidic (pH2) habitats belong to the two groups:

1. Eubacteria and archaea
2. Cyanobacteria and diatoms
3. Protists and mosses
4. Liverworts and yeasts

**Answer: (1)**

**Q. 86.** Genetic engineering has been successfully used for producing:

1. transgenic mice for testing safety of polio vaccine before use in humans
2. transgenic models for studying new treatments for certain cardiac diseases
3. transgenic Cow – Rosie which produces high fat milk for making ghee
4. animals like bulls for farm work as they have super power

**Answer: (1)**

**Q. 87.** Some of the characteristics of Bt cotton are:

1. Long fibre and resistance to aphids
2. Medium yield, long fibre and resistance to beetle pests
3. High yield and production of toxic protein crystals which kill dipteran pests
4. High yield and resistance to bollworms

**Answer: (4)**

**Q. 88.** Heartwood differs from sapwood in:

1. Presence of rays and fibres
2. Absence of vessels and parenchyma
3. Having dead and non-conducting elements
4. Being susceptible to pests and pathogens

**Answer: (3)**

**Q. 89.** Consider the following four statements (a – d) regarding kidney transplant and select the two correct ones out of these.

1. Even if a kidney transplant is proper the recipient may need to take immuno-suppressants for a long time
2. The cell-mediated immune response is responsible for the graft rejection
3. The B-lymphocytes are responsible for rejection of the graft

4. The acceptance or rejection of a kidney transplant depends on specific interferons

The two correct statements are:

- (1) (b) and (c) (2) (c) and (d)  
(3) (a) and (c) (4) (a) and (b)

**Answer: (4)**

**Q. 90.** Wind pollinated flowers are:

1. small, brightly coloured, producing large number of pollen grains
2. small, producing large number of dry pollen grains
3. large producing abundant nectar and pollen
4. small, producing nectar and dry pollen

**Answer: (2)**

**Q. 91.** dB is a standard abbreviation used for the quantitative expression of:

1. the density of bacteria in a medium
2. a particular pollutant
3. the dominant Bacillus in a culture
4. a certain pesticide

**Answer: (2)**

**Q. 92.** Which one of the following is one of the characteristics of a biological community?

1. Stratification
2. Natality
3. Mortality
4. Sex-ratio

**Answer: (1)**

**Q. 93.** Which one of the following statements about morula in humans is correct?

1. It has almost equal quantity of cytoplasm as an uncleaved zygote but much more DNA
2. It has far less cytoplasm as well as less DNA than in an uncleaved zygote
3. It has more or less equal quantity of cytoplasm and DNA as in uncleaved zygote.
4. It has more cytoplasm and more DNA than an uncleaved zygote

**Answer: (1)**

**Q. 94.** Coiling of garden pea tendrils around any support is an example of:

1. Thigmotaxis
2. Thigmonasty
3. Thigmotropism
4. Thermotaxis

**Answer: (3)**

**Q. 95.** The two gases making highest relative contribution to the greenhouse gases are:

1. CO<sub>2</sub> and CH<sub>4</sub>
2. CH<sub>4</sub> and N<sub>2</sub>O
3. CFC<sub>55</sub> and N<sub>2</sub>O
4. CO<sub>2</sub> and N<sub>2</sub>O

**Answer: (1)**

**Q. 96.** Which one of the following is not used in organic farming?

1. Glomus
2. Earthworm
3. Oscillatoria
4. Snail

**Answer: (4)**

**Q. 97.** Stirred-tank bioreactors have been designed for:

1. Addition of preservatives to the product
2. Purification of the product
3. Ensuring anaerobic conditions in the culture vessel
4. Availability of oxygen throughout the process

**Answer: (4)**

**Q. 98.** The part of Fallopian tube closest to the ovary is:

1. Isthmus
2. Infundibulum
3. Cervix
4. Ampulla

**Answer: (2)**

**Q. 99.** An improved variety of transgenic basmati rice:

1. does not require chemical fertilizers and growth hormones
2. gives high yield and is rich in vitamin A
3. is completely resistant to all insect pests and diseases of paddy
4. gives high yield but has no characteristic aroma

**Answer: (3)**

**Q. 100.** Infectious proteins are present in:

1. Gemini viruses
2. Prions
3. Viroids
4. Satellite viruses

**Answer: (2)**

### CHEMISTRY

**Q. 1.** Which one of the following species does not exist under normal conditions?

1.  $Be_2^+$
2.  $Be_2$
3.  $B_2$
4.  $Li_2$

**Sol:**

Bond order of  $Be_2 = 0$ , cannot exist

**Answer : (2)**

**Q. 2.** Which of the following complex ion is not expected to absorb visible light?

1.  $[M(CN)_4]^{2-}$
2.  $[Cr(NH_3)_6]^{+3}$
3.  $[Fe(H_2O)_6]^{2+}$
4.  $[Ni(H_2O)_6]^{2+}$

**sol.**

1.  $[M(CN)_4]^{2-}$  : Number of unpaired electrons – 0
2.  $[Cr(NH_3)_6]^{3+}$  : Number of unpaired electrons – 3
3.  $[Fe(H_2O)_6]^{2+}$  : Number of unpaired electrons – 4
4.  $[M(H_2O)_6]^{2+}$  : Number of unpaired electrons – 2

**Answer : (1)**

**Q. 3.** If pH of a saturated solution of  $Ba(OH)_2$  is 12, the value of its  $K_{sp}$  is:

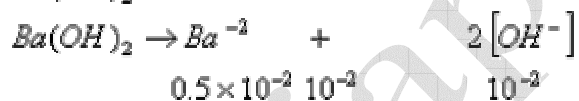
1.  $4.00 \times 10^{-6} M^3$
2.  $4.00 \times 10^{-7} M^3$
3.  $5.00 \times 10^{-6} M^3$
4.  $5.00 \times 10^{-7} M^3$

**Sol.**



$$pH = 12 \text{ or } pOH = 2$$

$$[OH^{-}] = 10^{-2} M$$



$$K_{sp} = [Ba^{+2}][OH^{-}]^2$$

$$= [0.5 \times 10^{-2}][1 \times 10^{-2}]^2$$

$$= 0.5 \times 10^{-6} = 5 \times 10^{-7} M^3$$

**Answer : (4)**

**Q. 4.** For the reaction

$N_2 O_5(g) \rightarrow 2NO_2(g) + 1/2 O_2(g)$  the value of rate of disappearance of  $N_2 O_5$  is given as  $6.25 \times 10^{-3} \text{ mol L}^{-1} \text{ s}^{-1}$ . The rate of formation of  $NO_2$  and  $O_2$  is given respectively as:



1.  $6.25 \times 10^{-3} \text{ mol L}^{-1} \text{ s}^{-1}$  and  $6.25 \times 10^{-3} \text{ mol L}^{-1} \text{ s}^{-1}$
2.  $1.25 \times 10^{-2} \text{ mol L}^{-1} \text{ s}^{-1}$  and  $3.125 \times 10^{-3} \text{ mol L}^{-1} \text{ s}^{-1}$
3.  $6.25 \times 10^{-3} \text{ mol L}^{-1} \text{ s}^{-1}$  and  $3.125 \times 10^{-3} \text{ mol L}^{-1} \text{ s}^{-1}$
4.  $1.25 \times 10^{-2} \text{ mol L}^{-1} \text{ s}^{-1}$  and  $6.25 \times 10^{-3} \text{ mol L}^{-1} \text{ s}^{-1}$

**Sol .**



$$\frac{d}{dt} [N_2 O_5] = + \frac{1}{2} \frac{d}{dt} [NO_2] = 2 \frac{d}{dt} [O_2]$$

$$\frac{d}{dt} [NO_2] = 1.25 \times 10^{-2} \text{ mol L}^{-1} \text{ s}^{-1} \text{ and}$$

$$\frac{d}{dt} [NO_2] = 1.25 \times 10^{-2} \text{ mol L}^{-1} \text{ s}^{-1} \text{ and}$$

$$\frac{d}{dt} [O_2] = 3.125 \times 10^{-3} \text{ mol L}^{-1} \text{ s}^{-1}$$

**Answer : (2)**

**Q. 5.** Which one of the following does **not** exhibit the phenomenon of mutarotation?

1. (+) Sucrose
2. (+) Lactose
3. (+) Maltose
4. (-) Fructose

**Sol:**

Sucrose does not have free – CHO and CO groups

**Answer : (1)**

**Q. 6.** In which of the following pairs of molecules/ions, the central atoms have  $sp^2$  hybridization?

1.  $NO_2^-$  and  $NH_3$
2.  $BF_3$  and  $NO_2^-$
3.  $NH_2^-$  and  $H_2O$
4.  $BF_3$  and  $NH_2^-$

**Sol .**

$$BF_3 : \frac{3+3}{2} = 3, sp^2$$

$$NO_2^- : \frac{5+1}{2} = 3, sp^2$$

**Answer : (2)**

**Q. 7.** Liquid hydrocarbons can be converted to a mixture of gaseous hydrocarbons by:

1. Oxidation
2. Cracking
3. Distillation under reduced pressure
4. Hydrolysis

**Sol:**

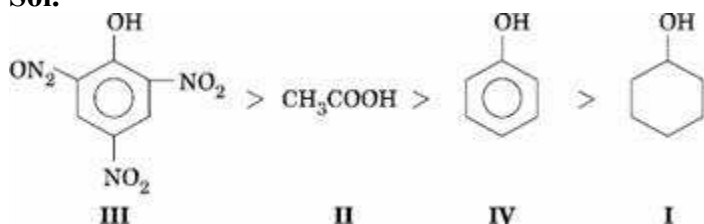
During cracking, lower gaseous hydrocarbons are formed.

**Answer : (2)**

**Q. 8.** Given are cyclohexanol (I), acetic acid (II), 2, 4, 6-trinitrophenol (III) and phenol (IV). In these the order of decreasing acidic character will be:

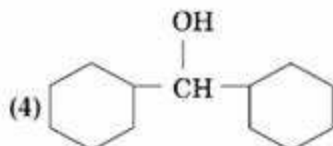
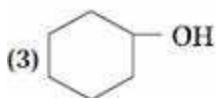
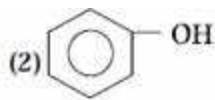
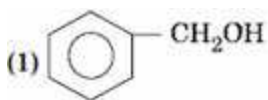
1. III > II > IV > I
2. II > III > I > IV
3. II > III > IV > I
4. III > IV > II > I

Sol.



Answer : (1)

Q. 9. Which one of the following compounds has the most acidic nature?



Sol:

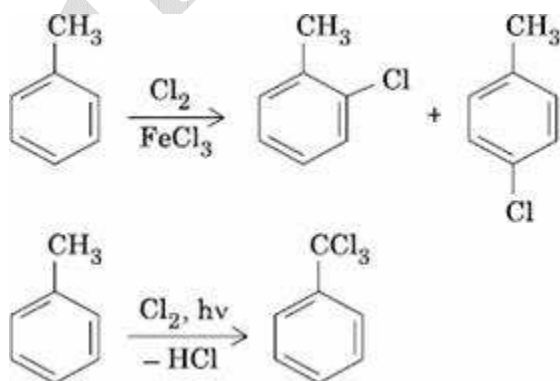
Phenol is most acidic, the other compounds are alcohols.

Answer : (2)

Q. 10. The reaction of toluene with  $\text{Cl}_2$  in presence of  $\text{FeCl}_3$  gives 'X' and reaction in presence of light gives 'Y'. Thus, 'X' and 'Y' are:

1. X = Benzal chloride, Y = o-chlorotoluene
2. X = m-chlorotoluene, Y = p-chlorotoluene
3. X = o- and p-chlorotoluene, Y = Trichloromethyl benzene
4. X = Benzyl chloride, Y = m-chlorotoluene

Sol.

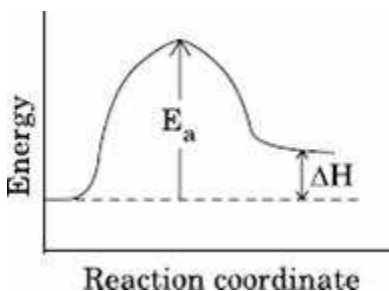


**Answer : (3)**

**Q. 11.** For an endothermic reaction, energy of activation is  $E_a$  and enthalpy of reaction is  $\Delta H$  (both of these in kJ/mol). Minimum value of  $E_a$  will be:

1. less than  $\Delta H$
2. equal to  $\Delta H$
3. more than  $\Delta H$
4. equal to zero

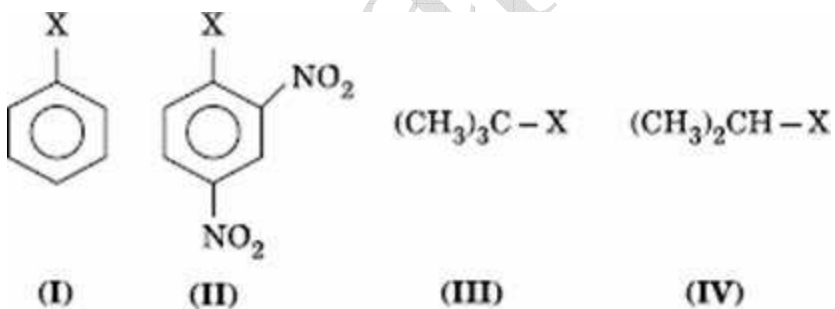
**Sol.**



$$E_a > \Delta H$$

**Answer : (3)**

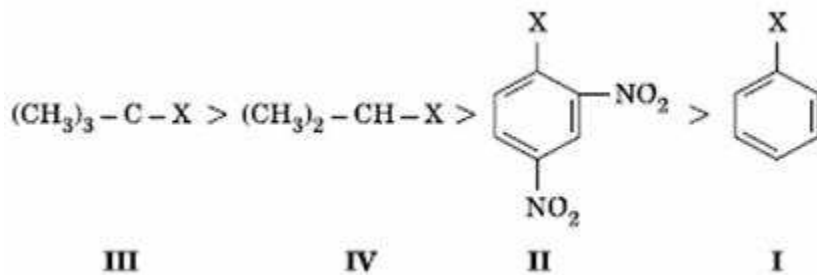
**Q. 12.** The correct order of increasing reactivity of C – X bond towards nucleophile in the following compounds is:



1.  $\text{I} < \text{II} < \text{IV} < \text{III}$
2.  $\text{II} < \text{III} < \text{I} < \text{IV}$
3.  $\text{IV} < \text{III} < \text{I} < \text{II}$
4.  $\text{III} < \text{II} < \text{I} < \text{IV}$

**Sol:**

Tertiary alkyl halide has the highest rate in nucleophilic substitution. Aryl halide has the least rate due to partial double character. Presence of  $-\text{NO}_2$  groups in ortho and para positions will increase the reactivity.



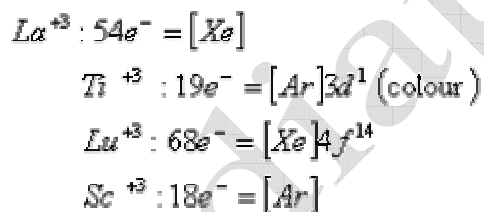
or  $\text{I} < \text{II} < \text{IV} < \text{III}$

**Answer : (1)**

**Q. 13.** Which of the following ions will exhibit colour in aqueous solutions?

1.  $\text{La}^{3+}$  ( $Z = 57$ )
2.  $\text{Ti}^{3+}$  ( $Z = 22$ )
3.  $\text{Lu}^{3+}$  ( $Z = 71$ )
4.  $\text{Sc}^{3+}$  ( $Z = 21$ )

**Sol:**



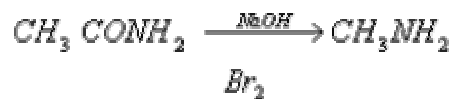
**Answer : (2)**

**Q. 14.** Acetamide is treated with the following reagents separately. Which one of these would yield methylamine?

1.  $\text{NaOH} - \text{Br}_2$
2. Sodalime
3. Hot conc.  $\text{H}_2\text{SO}_4$

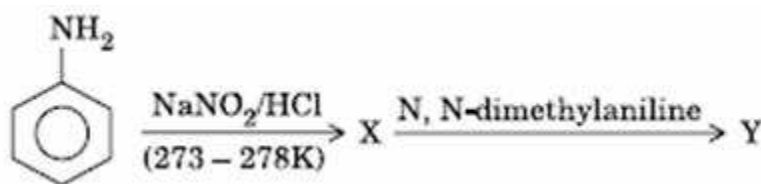


Sol.

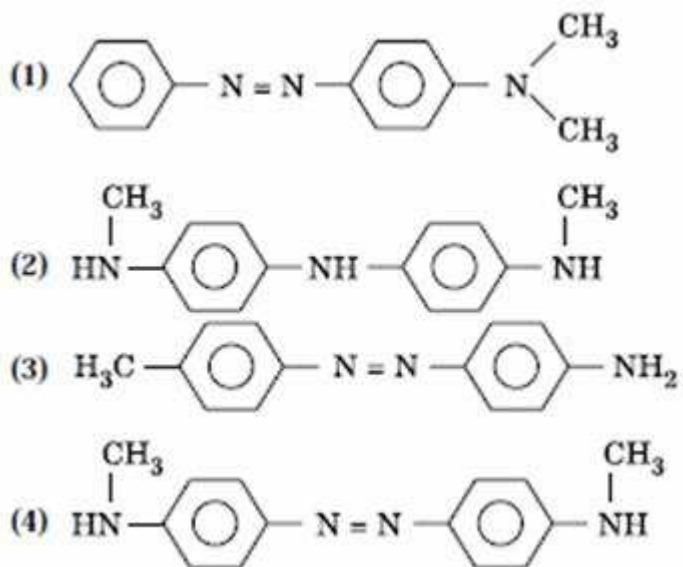


Answer : (1)

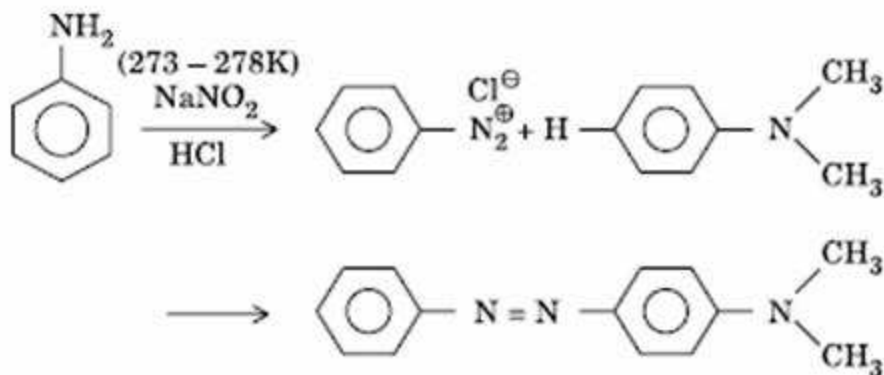
Q. 15. Aniline in a set of the following reactions yielded a coloured product 'Y'.



The structure of 'Y' would be:



Sol.



**Answer : (1)**

**Q. 16.** A solution of sucrose (molar mass =  $342 \text{ g mol}^{-1}$ ) has been prepared by dissolving 68.5 g of sucrose in 1000 g of water. The freezing point of the solution obtained will be: ( $K_f$  for water =  $1.86 \text{ K kg mol}^{-1}$ )

1.  $-0.372^\circ\text{C}$
2.  $-0.520^\circ\text{C}$
3.  $+0.372^\circ\text{C}$
4.  $-0.570^\circ\text{C}$

**Sol.**

$$\Delta T_f = K_f \frac{1000 W_2}{M_2 W_1} = \frac{1.86 \times 1000 \times 68.5}{342 \times 1000} = 0.372$$

$$T_f = -0.372^\circ\text{C}$$

**Answer: (1)**

**Q. 17.** An increase in equivalent conductance of a strong electrolyte with dilution is mainly due to:

1. increase in ionic mobility of ions
2. 100% ionisation of electrolyte at normal dilution
3. increase in both i.e. number of ions and ionic mobility of ions
4. increase in number of ions.

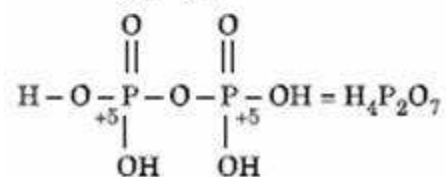
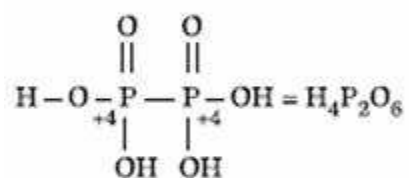
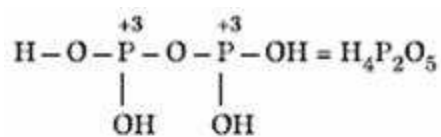
**Answer : (1)**

**Q. 18.** Oxidation states of P in  $\text{H}_4\text{P}_2\text{O}_5$ ,  $\text{H}_4\text{P}_2\text{O}_6$ ,  $\text{H}_4\text{P}_2\text{O}_7$  are respectively:

1. +3, +5, +4
2. +5, +3, +4
3. +5, +4, +3

4. +3, +4, +5

Sol.



Answer : (4)

Q. 19. The correct order of increasing bond angles in the following species are:

1.



2.



3.

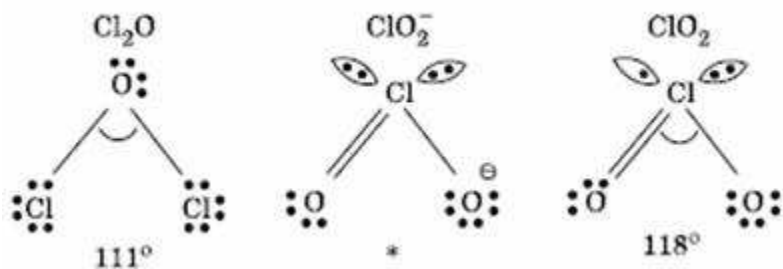


4.



Sol:

The correct order of increasing bond angle is  $\text{Cl}_2\text{O} < \text{ClO}_2^- < \text{ClO}_2$





\* In  $\text{ClO}_2^-$  there are 2 lone pairs of electrons present on the central chlorine atom. Therefore the bond angle in  $\text{ClO}_2^-$  is less than  $118^\circ$  which is the bond angle in  $\text{ClO}_2$  which has less number of electrons on chlorine.

**Answer : (3)**

**Q. 20.** Which of the following alkaline earth metal sulphates has hydration enthalpy higher than the lattice enthalpy?

1.  $\text{CaSO}_4$
2.  $\text{BeSO}_4$
3.  $\text{BaSO}_4$
4.  $\text{SrSO}_4$

**Sol:**

$\text{Be}^{+2}$  is very small, hence its hydration enthalpy is greater than its lattice Enthalpy

**Correct choice : (2)**

**Q. 21.** Crystal field stabilization energy for high spin d4 octahedral complex is:

1.  $-1.8\Delta_0$
2.  $-1.6\Delta_0 + P$
3.  $-1.2\Delta_0$
4.  $-0.6\Delta_0$

**Sol:**

d4 in high spin octahedral complex

$e_g \uparrow -$

$t_{2g} \uparrow \uparrow \uparrow$

$$CFSE = [0.6 \times 1] + [-0.4 \times 3] = -0.6 \Delta_0$$

**Answer : (4)**

**Q. 22.** Which one of the following ions has electronic configuration  $[\text{Ar}] 3d^6$ ?

1.  $M^{3+}$
2.  $Mn^{3+}$
3.  $Fe^{3+}$
4.  $Co^{3+}$

(At. Nos. Mn = 25, Fe = 26, Co = 27, Ni = 28)

**Sol:**



**Answer : (4)**

**Q. 23.** Which of the following statements about primary amines is 'False'?

1. Alkyl amines are stronger bases than aryl amines
2. Alkyl amines react with nitrous acid to produce alcohols
3. Aryl amines react with nitrous acid to produce phenols
4. Alkyl amines are stronger bases than ammonia

**Sol:**

Aryl amines will not produce phenol on Treatment with nitrous acid.

**Answer : (3)**

**Q. 24.** An aqueous solution is 1.00 molal in KI. Which change will cause the vapour pressure of the solution to increase?

1. Addition of NaCl
2. Addition of  $Na_2SO_4$
3. Addition of 1.00 molal KI
4. Addition of water

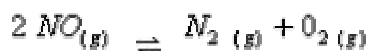
**Sol:**

When the aqueous solution of one molal KI is diluted with water, concentration decreases, therefore the vapour pressure of the resulting solution increases.

**Correct choice : (4)**

**Q. 25.** In which of the following equilibrium  $K_c$  and  $K_p$  are not equal?

1.



2.



3.



4.



**Sol .**



$$\Delta n = 2 - 1 = +1$$

$\therefore K_c$  and  $K_p$  are not equal

**Answer : (4)**

**Q. 26.** For the reduction of silver ions with copper metal, the standard cell potential was found to be + 0.46 V at 25°C. The value of standard Gibbs energy,  $\Delta G^0$  will be ( $F = 96500 \text{ C mol}^{-1}$ )

1. - 89.0 kJ

2. - 89.0 J

3. - 44.5 kJ

4. - 98.0 kJ

**Sol.**



$$E_{\text{cell}}^0 = + 0.46 \text{ V}$$

$$\Delta G^0 = -nE^0 F$$

$$= \frac{-2 \times 0.46 \times 96500}{1000} \text{ kJ}$$

$$= -89 \text{ KJ}$$

Answer : (1)

Q. 27 What is  $[H^+]$  in mol/L of a Solution that is 0.20 M

$CH_3COON_a$  and 0.10 M

in  $CH_3COOH$  ?  $K_a$  for  $CH_3COOH = 1.8 \times 10^{-5}$

1.  $3.5 \times 10^{-4}$
2.  $1.1 \times 10^{-5}$
3.  $1.8 \times 10^{-5}$
4.  $9.0 \times 10^{-6}$

Sol .

$$pH = pK_a + \log \left[ \frac{Salt}{Acid} \right]$$

$$\text{Log } [H^+] = \log K_a - \text{Log} \left[ \frac{Salt}{Acid} \right]$$

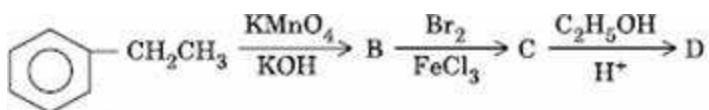
$$\text{Log } [H^+] = \log K_a - \text{Log} \left[ \frac{Acid}{Salt} \right]$$

$$[H^+] = K_a \left[ \frac{Acid}{Salt} \right]$$

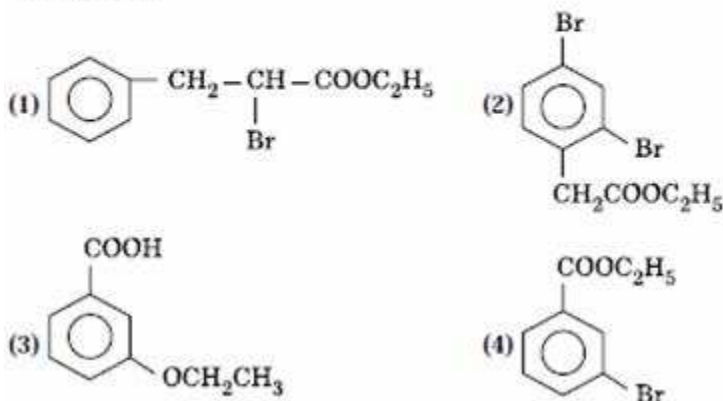
$$= 1.8 \times 10^{-5} \times \frac{0.1}{0.2} = 9 \times 10^{-6} M$$

Answer: (4)

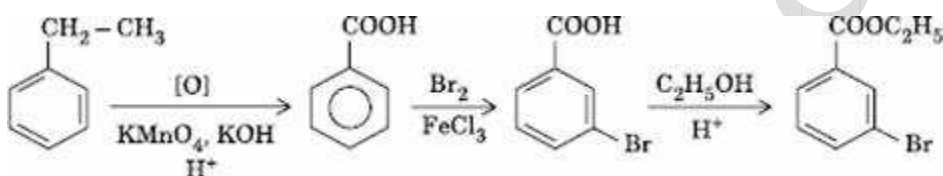
Q. 28. In a set of reactions, ethyl benzene yielded a product D.



'D' would be:



Sol.



Answer : (4)

Q. 29. 25.3 g of sodium carbonate,  $\text{Na}_2\text{CO}_3$  is dissolved in enough water to make 250 mL of solution. If sodium carbonate dissociates completely, molar concentration of sodium ion,  $\text{Na}^+$  and carbonate ions,  $\text{CO}_3^{2-}$  are respectively (Molar mass of  $\text{Na}_2\text{CO}_3 = 106 \text{ g mol}^{-1}$ )

1. 0.955 M and 1.910 M
2. 1.910 M and 0.955 M
3. 1.90 M and 1.910 M
4. 0.477 M and 0.477 M

Sol .

$$\text{Concentration of } \text{Na}_2\text{CO}_3 = \frac{25.3}{106} \times \frac{1000}{250} = 0.955 \text{ M}$$

$$[\text{Na}^+] = 2 \times 0.955 = 1.91$$

$$[\text{CO}_3^{2-}] = 0.955 \text{ M}$$

Answer : (2)

**Q. 30.** Property of the alkaline earth metals that increases with their atomic number:

1. Solubility of their hydroxides in water
2. Solubility of their sulphates in water
3. Ionization energy
4. Electronegativity

**Sol:**

Lattice energy decreases more rapidly than hydration energy for alkaline earth metal hydroxides

**Answer : (1)**

**Q. 31.** Which of the following pairs has the same size?

1.  $Fe^{2+}$ ,  $Mn^{2+}$
2.  $Zr^{4+}$ ,  $Ti^{4+}$
3.  $Zr^{4+}$ ,  $Hf^{4+}$
4.  $Zn^{2+}$ ,  $Hf^{4+}$

**Sol:**

Due to lanthanide contraction, the size of Zr and Hf (atom and ions) remain constant

**Answer : (3)**

**Q. 32.** In which one of the following species the central atom has the type of hybridization which is not the same as that present in the other three?

1.  $SF_4$
2.  $I_3^-$
3.  $SbCl_5^-$
4.  $PCl_5$

**Sol:**

$$SbCl_5^{-2} : \frac{5+5+2}{2} = 6, sp^3d^2$$

$I_3^-$ ,  $SF_6$ ,  $PCl_5$  all have  $sp^3d$  hybridization.

**Answer : (3)**

**Q. 33.** Which of the following represents the correct order of increasing electron gain enthalpy with negative sign for the elements O, S, F and Cl?

1.  $Cl < F < O < S$
2.  $O < S < F < Cl$
3.  $F < S < O < Cl$
4.  $S < O < Cl < F$

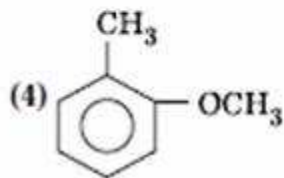
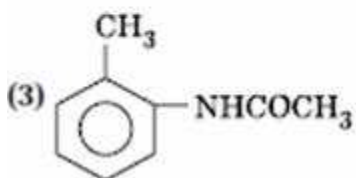
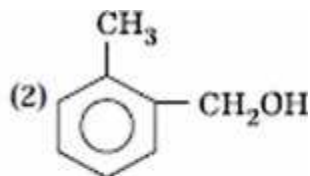
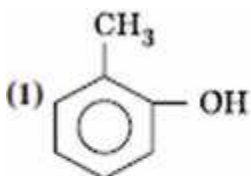
**Sol:**

$O < S < F < Cl$

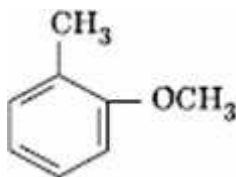
Electron gain enthalpy – 141 – 200 – 333 – 349  $\text{kJ mol}^{-1}$

**Answer : (2)**

**Q. 34.** Which one is most reactive towards electrophilic reagent?



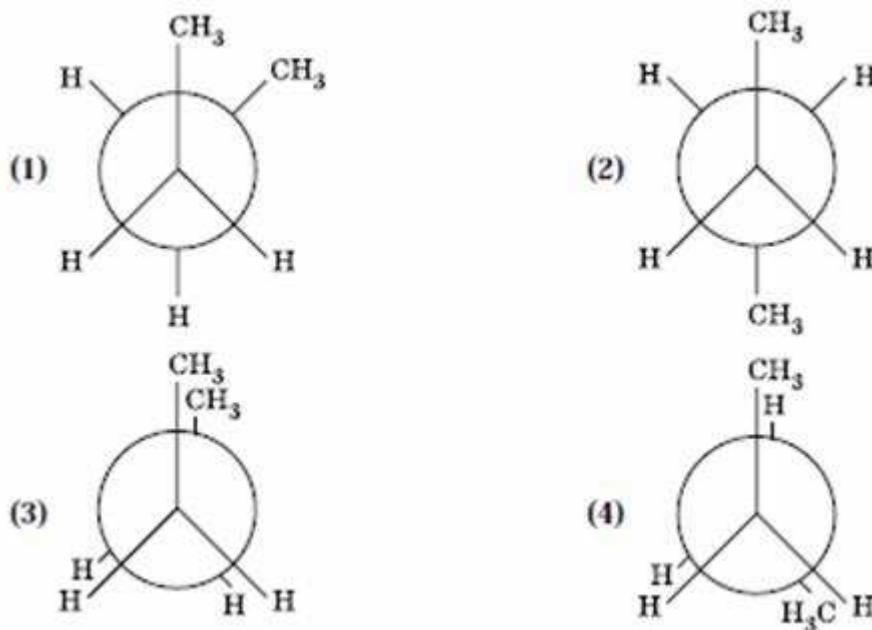
**Sol.**



Methoxy group has the highest + M effect.

Answer : (4)

Q. 35. In the following the most stable conformation of n-butane is:



Answer : (2)

Q. 36. Which one is most reactive towards S<sub>N</sub>1 reaction?

1.  $C_6H_5CH(C_6H_5)Br$
2.  $C_6H_5CH(CH_3)Br$
3.  $C_6H_5C(CH_3)(C_6H_5)Br$
4.  $C_6H_5CH_2Br$

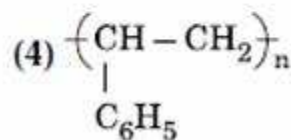
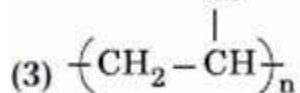
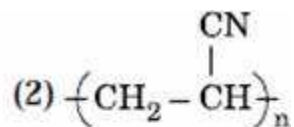
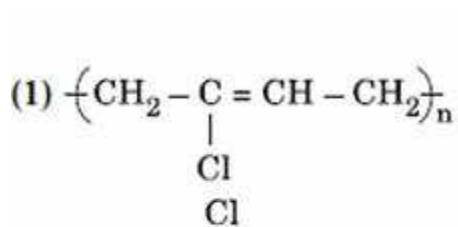
Sol:

Tertiary carbonium ion formed is stabilized by two phenyl groups and one methyl group.

Answer: (3)

Q. 37. Which of the following structures represents Neoprene polymer?





Answer : (1)

Q. 38. Which one of the following is employed as a Tranquilizer drug?

1. Promethazine
2. Valium
3. Naproxen
4. Mifepristone.

Answer : (2)

Q. 39. Which of the following reactions will **not** result in the formation of carbon-carbon bonds?

1. Reimer-Tieman reaction
2. Cannizaro reaction
3. Wurtz reaction
4. Friedel-Crafts acylation

Answer: (2)

Q. 40. Which one of the following molecular hydrides acts as a Lewis acid?

1.  $\text{NH}_3$
2.  $\text{H}_2\text{O}$
3.  $\text{B}_2\text{H}_6$
4.  $\text{CH}_4$ ,  $\text{BF}_3$

Answer : (3)

Q. 41. The tendency of  $BF_3$ ,  $BCl_3$  and  $BBr_3$  to behave as Lewis acid decreases in the sequence:

1.  $BCl_3 > BF_3 > BBr_3$
2.  $BBr_3 > BCl_3 > BF_3$
3.  $BBr_3 > BF_3 > BCl_3$
4.  $BF_3 > BCl_3 > BBr_3$

Sol:

p-p overlap between B and F is maximum due to identical size and energy of orbitals, so electron deficiency in boron of  $BF_3$  is neutralized partially to the maximum extent by back donation. Hence  $BF_3$  is least acidic.

Answer : (2)

Q. 42. The number of atoms in 0.1 mol of a triatomic gas is:

$$(N_A = 6.02 \times 10^{23} \text{ mol}^{-1})$$

1.  $6.026 \times 10^{22}$
2.  $1.806 \times 10^{23}$
3.  $3.600 \times 10^{23}$
4.  $1.800 \times 10^{22}$

Sol:

$$\begin{aligned} \text{The number of atoms in 0.1 mole of a triatomic gas} &= 0.1 \times 3 \times 6.023 \times 10^{23} \\ &= 1.806 \times 10^{23} \end{aligned}$$

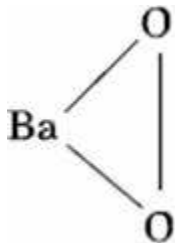
Answer : (2)

Q. 43. Which one of the following compounds is a peroxide?

1.  $KO_2$
2.  $BaO_2$

3.  $Mn_2O_2$
4.  $NO_2$

Sol.



Answer: (2)

Q. 44. Standard entropies of  $X_2$ ,  $Y_2$  and  $XY_3$  are 60, 40 and  $50 \text{ JK}^{-1} \text{ mol}^{-1}$  respectively.

For the reaction  $\frac{1}{2} X_2 + \frac{3}{2} Y_2 \rightleftharpoons XY_3$ ,  $\Delta H = -30 \text{ KJ}$  to be at equilibrium, the temperature should be:

1. 750 K
2. 1000 K
3. 1250 K
4. 500 K

Sol:

$\Delta S$  for the reaction  $\frac{1}{2} X_2 + \frac{3}{2} Y_2 \rightleftharpoons XY_3$

$$\Delta S = 50 - (30 + 60) = -40 \text{ J}$$

For equilibrium  $\Delta G = 0 = \Delta H - T\Delta S$

$$T = \frac{\Delta H}{\Delta S} = \frac{-30000}{-40} = 750 \text{ K}$$

Answer: (1)

Q. 45. The correct order of the decreasing ionic radii among the following is electronic species are:

1.  $Ca^{2+} > K^+ > S^{2-} > Cl^-$
2.  $Cl^- > S^{2-} > Ca^{2+} > K^+$
3.  $S^{2-} > Cl^- > K^+ > Ca^{2+}$
4.  $K^+ > Ca^{2+} > Cl^- > S^{2-}$

**Sol:**

Among the isoelectronic species  $S^{2-}$  has the highest negative charge and hence largest in size followed by  $Cl^-$ ,  $K^+$  and  $Ca^{+2}$

**Answer : (3)**

**Q. 46.** During the kinetic study of the reaction,  $2A + B \rightarrow C + D$ , following results were obtained:

Run	$[A]/\text{mol L}^{-1}$	$[B]/\text{mol L}^{-1}$	Initial rate of formation of D/ $\text{mol L}^{-1} \text{min}^{-1}$
i	0.1	0.1	$6.0 \times 10^{-3}$
II	0.3	0.2	$7.2 \times 10^{-2}$
III	0.3	0.4	$2.88 \times 10^{-1}$
IV	0.4	0.1	$2.40 \times 10^{-2}$

Based on the above data which one of the following is correct?

1.  $\text{rate} = K[A]^2 [B]$
2.  $\text{rate} = K[A][B]$
3.  $\text{rate} = K[A]^2 [B]^2$
4.  $\text{rate} = K[A][B]^2$

**Sol:**

Keeping concentration of  $[A]$  constant, when the concentration of  $[B]$  is doubled, the rate quadruples. Hence it is second order with respect to B. Keeping the concentration of  $[B]$  constant, when the concentration of  $[A]$  is increased four times, rate also increases four times. Hence the order with respect to A is one.

$$\text{Rate} = K[A][B]^2$$

**Answer: (4)**

**Q. 47.** In a buffer solution containing equal concentration of  $B^-$  and HB, the  $K_b$  for  $B^-$  is  $10^{-10}$ . The pH of buffer solution is:

1. 10
2. 7
3. 6
4. 4

**Sol.**

$$K_b = 10^{-10}; K_a = 10^{-4} \text{ or } pK_a = 4$$

For the buffer solution containing equal concentration of  $B^-$  and HB

$$pH = pK_a + \log 1$$

$$pH = pK_a = 4$$

**Answer: (4)**

**Q. 48.** AB crystallizes in a body centred cubic lattice with edge length 'a' equal to 387 pm. The distance between two oppositely charged ions in the lattice is:

1. 335 pm
2. 250 pm
3. 200 pm
4. 300 pm

**Sol:**

For BCC lattice body diagonal is equal to  $a\sqrt{3}$

The distance between the two oppositely charged ions =  $\frac{a\sqrt{3}}{2}$

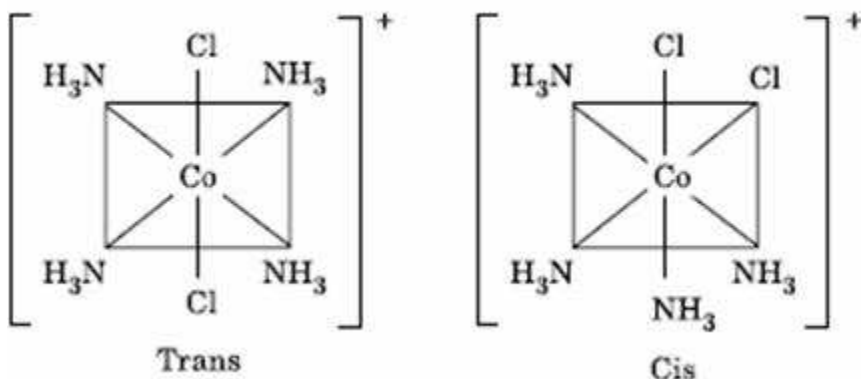
$$= \frac{387 \times 1.732}{2} = 335 \text{ Pm}$$

**Answer : (1)**

**Q. 49.** The existence of two different coloured complexes with the composition of  $[Co(NH_3)_4Cl_2]^+$  is due to:

1. linkage isomerism
2. geometrical isomerism
3. coordination isomerism
4. ionization isomerism

Sol.



Answer : (2)

**Q. 50.** Among the given compounds, the most susceptible to nucleophilic attack at the carbonyl group is:

1.  $CH_3COOCH_3$
2.  $CH_3CONH_2$
3.  $CH_3COOCOCH_3$
4.  $CH_3COCl$

Sol:

$Cl^-$  is the weakest base and hence better leaving group

Answer : (4)

## PHYSICS

**Q.1.** Consider the following two statements:

- a. Kirchhoff's junction law follows from the conservation of charge.
- b. Kirchhoff's loop law follows from the conservation of energy

Which of the following is correct?

1. Both (A) and (B) are wrong
2. (A) is correct and (B) is wrong
3. (A) is wrong and (B) is correct
4. (4) Both (A) and (B) are correct

**Sol:**

Junction – conservation of charge Loop – conservation of energy

**Answer: (4)**

**Q. 2.** Electromagnets are made of soft iron because soft iron has:

1. low retentivity and high coercive force
2. high retentivity and high coercive force
3. low retentivity and low coercive force
4. high retentivity and low coercive force

**Answer : (4)**

**Q. 3.** A series combination of  $n_1$  capacitors, each of value  $C_1$ , is charged by a source of potential difference  $4 V$ . When another parallel combination of  $n_2$  capacitors, each of value  $C_2$ , is charged by a source of potential difference  $V$ , it has the same (total) energy stored in it, as the first combination has. The value of  $C_2$ , in terms of  $C_1$ , is then:

1.  $\frac{2C_1}{n_1 n_2}$
2.  $16 \frac{n_2}{n_1} C_1$
3.  $2 \frac{n_2}{n_1} C_1$
4.  $\frac{16C_1}{n_1 n_2}$

**Sol:**

$$1. \text{ Series } C_{\text{eff}} = \frac{C_1}{n_1}, E_s = \frac{1}{2} C_{\text{eff}} V^2 = \frac{1}{2} \frac{C_1}{n_1} 16 V^2$$

$$= 8V^2 \frac{C_1}{n_1}$$

$$2. \text{ Parallel } C_{\text{eff}} = n_2 C_2, E_p = \frac{1}{2} n_2 C_2 V^2$$

$$\therefore \frac{8V^2 C_1}{n_1} = \frac{1}{2} n_2 C_2 V^2$$

$$C_2 = \frac{16C_1}{n_1 n_2}$$

**Answer : (4)**

**Q. 4.** The potential difference that must be applied to stop the fastest photoelectrons emitted by a nickel surface, having work function 5.01 eV, when ultraviolet light of 200 nm falls on it, must be:

1. 2.4 V
2. -1.2 V
3. -2.4 V
4. 1.2 V

**Sol:**

$$K_{\text{max}} = \frac{hc}{\lambda} - 5.01 = \frac{12375}{\lambda \text{ (in } \text{\AA})} - 5.01$$

$$= \frac{12375}{2000} - 5.01 = 6.1875 - 5.01 = 1.1775 \approx 1.2V$$

**Answer : (4)**

**Q. 5.** Two positive ions, each carrying a charge q, are separated by a distance d. If F is the force of repulsion between the ions, the number of electrons missing from each ion will be (e being the charge of an electron):

1.

$$\frac{4\pi\epsilon_0 F d^2}{e^2}$$

2.

$$\sqrt{\frac{4\pi\epsilon_0 F d^2}{d^2}}$$



3.

$$\sqrt{\frac{4\pi\epsilon_0 F d^2}{e^2}}$$

4.

$$\frac{4\pi\epsilon_0 F d^2}{q^2}$$

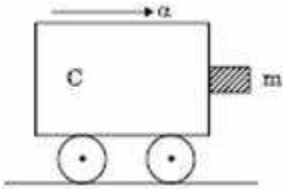
**Sol:**

$$F = \frac{1}{4\pi\epsilon_0} \cdot \frac{q^2}{d^2} \Rightarrow q = \sqrt{4\pi\epsilon_0 F d^2} \quad F = ne$$

$$\therefore n = \sqrt{\frac{4\pi\epsilon_0 F d^2}{e^2}}$$

**Answer : (3)**

**Q. 6.** A block of mass  $m$  is in contact with the cart C as shown in the Figure.



The coefficient of static friction between the block and the cart is  $\mu$ . The acceleration  $\alpha$  of the cart that will prevent the block from falling satisfies:

1.

$$\alpha > \frac{mg}{\mu}$$

2.

$$\alpha > \frac{g}{\mu m}$$

3.

$$\alpha < \frac{g}{\mu}$$

4.

$$\alpha < \frac{g}{\mu}$$

**Sol.**

$$mg = \mu m \alpha$$

$$\alpha \geq \frac{g}{\mu}$$

**Answer: (3)**

**Q. 7.** A circular disk of moment of inertia  $I_1$  is rotating in a horizontal plane, about its symmetry axis, with a constant angular speed  $(\omega)_1$ . Another disk of moment of inertia  $I_2$  is dropped coaxially onto the rotating disk. Initially the second disk has zero angular speed. Eventually both the disks rotate with a constant angular speed  $(\omega)_f$ . The energy lost by the initially rotating disk to friction is:

1.

$$\frac{1}{2} \frac{I_2^2}{(I_1 + I_2)} (\omega)_1^2$$

2.

$$\frac{1}{2} \frac{I_1^2}{(I_1 + I_2)} (\omega)_1^2$$

3.

$$\frac{I_2 - I_1}{(I_1 + I_2)} (\omega)_1^2$$

4.

$$\frac{1}{2} \frac{I_2 - I_1}{(I_1 + I_2)} (\omega)_1^2$$

**Sol.**

$$I_1 (\omega)_1 = (I_1 + I_2) (\omega)_f$$

$$(I_1 + I_2) (\omega)_f$$

$$\Delta K = \frac{1}{2} I_1 (\omega)_1^2 - \frac{1}{2} (I_1 + I_2) \frac{I_1^2}{(I_1 + I_2)^2} (\omega)_1^2$$

$$= \frac{1}{2} (\omega)_1^2 \frac{I_1}{I_1 + I_2} (I_1 + I_2 - I_1) = \frac{1}{2} (\omega)_1^2 \frac{I_1 I_2}{I_1 + I_2}$$

**Answer : (4)**

**Q. 8.** The displacement of a particle along the x-axis is given by  $x = a \sin^2 \omega t$ . The motion of the particle corresponds to:

1. Simple harmonic motion of frequency  $\omega/\pi$
2. Simple harmonic motion of frequency  $3\omega/2\pi$
3. Non simple harmonic motion
4. Simple harmonic motion of frequency  $\omega/2\pi$

**Sol.**

$$x = a \sin^2 \omega t = \frac{a}{2} (1 - \cos 2\omega t)$$

$$\frac{dx}{dt} = \frac{a}{2} 2\omega \sin 2\omega t, \quad \frac{d^2x}{dt^2} = \frac{4\omega^2 a}{2} \cos 2\omega t$$

$$\text{SHM of Frequency} = \frac{\omega}{\pi}$$

**Answer : (1)**

**Q. 9.** The radii of circular orbits of two satellites A and B of the earth, are  $4R$  and  $R$ , respectively. If the speed of satellite A is  $3V$ , then the speed of satellite B will be:

1.  $3V/4$
2.  $6V$
3.  $12V$
4.  $3V/2$

**Sol.**

$$\frac{V^2}{r} = \frac{K}{r^2} \Rightarrow rV^2 = \text{constant}$$

$$r_1 V_1^2 = r_2 V_2^2$$

$$V_2 = V_1 \sqrt{\frac{r_1}{r_2}} = V_1 \sqrt{\frac{4R}{R}} = 2V_1 = 6V$$

**Answer : (2)**

**Q. 10.** A ball is dropped from a high rise platform at  $t = 0$  starting from rest. After 6 seconds another ball is thrown downwards from the same platform with a speed  $v$ . The two balls meet at  $t = 18$  s. What is the value of  $v$ ?

(take  $g = 10 \text{ m/s}^2$ )

1.  $75 \text{ m/s}$
2.  $55 \text{ m/s}$
3.  $40 \text{ m/s}$
4.  $60 \text{ m/s}$

**Sol.**Distance moved in 18 s by I ball

$$\frac{1}{2} \times 10 \times 18^2 \\ = 90 \times 18 = 1620 \text{ m}$$

Distance moved in 12 s by II ball =  $ut + \frac{1}{2}gt^2$

$$\therefore 1620 = 12u + 5 \times 144$$

$$u = 135 - 60 = 75 \text{ ms}^{-1}$$

**Answer : (1)**

**Q. 11.** A ray of light travelling in a transparent medium of refractive index  $\mu$ , falls on a surface separating the medium from air at an angle of incidence of  $45^\circ$ . For which of the following value of  $\mu$  the ray can undergo total internal reflection?

1.  $\mu = 1.33$
2.  $\mu = 1.40$
3.  $\mu = 1.50$
4.  $\mu = 1.25$

**Sol :**

$$\mu \geq \frac{1}{\sin C} \geq \sqrt{2} \geq 1.414 \Rightarrow \mu = 1.50$$

**Answer: (3)**

**Q. 12.** A cylindrical metallic rod in thermal contact with two reservoirs of heat at its two ends conducts an amount of heat  $Q$  in time  $t$ . The metallic rod is melted and the material is formed into a rod of half the radius of the original rod. What is the amount of heat conducted by the new rod, when placed in thermal contact with the two reservoirs in time  $t$ ?

1.  $\frac{Q}{4}$
2.  $\frac{Q}{16}$
3.  $2Q$

4.

$$\frac{Q}{2}$$

**Sol.**

$$\frac{Q}{t} = K \cdot A \frac{\Delta T}{\ell} \quad A = \pi R^2; \quad \pi R^2 \ell = \pi \left(\frac{R'}{2}\right)^2 \ell'$$

$$A' = \frac{\pi R'^2}{4}; \quad \frac{\ell'}{\ell} = \frac{R^2}{\left(\frac{R'}{2}\right)^2}$$

$$\frac{Q'}{Q} = \frac{A' \ell'}{A \ell} = \frac{1}{4} \cdot \frac{1}{4} = \frac{1}{16}$$

$$\therefore Q' = \frac{Q}{16}$$

**Answer : (2)**

**Q.13.** A transverse wave is represented by  $y = A \sin(\omega t - kx)$ . For what value of the wavelength is the wave velocity equal to the maximum particle velocity?

1.

$$\frac{\pi A}{2}$$

2.

$$\pi A$$

3.

$$2\pi A$$

4.

$$A$$

**Sol.**

$$Y = A \sin(\omega t - kx)$$

$$V_p = \frac{dy}{dt} = A \omega \cos(\omega t - kx)$$

$$V_p \text{ max} = A \omega = \frac{\omega}{k} \quad \text{i.e., } A = \frac{1}{k}, k = \frac{2\pi}{\lambda}$$

$$\therefore \lambda = 2\pi A$$

**Answer : (3)**

**Q. 14.** An engine pumps water through a hose pipe. Water passes through the pipe and leaves it with a velocity of 2 m/s. The mass per unit length of water in the pipe is 100 kg/m. What is the power of the engine?

1. 400 W
2. 200 W
3. 100 W
4. 800 W

**Sol:** Amount of water flowing per second.

$$= \frac{m}{\text{time}} = \frac{m \ell}{\ell \cdot t} = \left(\frac{m}{\ell}\right)v$$

$$\begin{aligned} \text{K.E of water flowing per second} = \text{power} &= \frac{1}{2} \left(\frac{m}{\ell}\right)v^3 \\ &= \frac{1}{2} \times 100 \times 8 = 400 \text{ w} \end{aligned}$$

**Answer : (1)**

**Q.15.** Which one of the following bonds produces a solid that reflects light in the visible region and whose electrical conductivity decreases with temperature and has high melting point?

1. metallic bonding
2. van der Waal's bonding
3. ionic bonding
4. covalent bonding

**Sol:**

Metal – conductivity decreases with increase in temperature.

**Answer : (1)**

**Q. 16.** A conducting circular loop is placed in a uniform magnetic field,  $B = 0.025 \text{ T}$  with its plane perpendicular to the loop. The radius of the loop is made to shrink at a constant rate of  $1 \text{ mm s}^{-1}$ . The induced e.m.f. when the radius is 2 cm, is:

1.  $2\pi \mu\text{V}$
2.  $\pi \mu\text{V}$

3.

$$\frac{\pi}{2} \mu V$$

4.

$$2\mu V$$

**Sol:**

$$\phi = B\pi r^2 \cdot |e| = \frac{d\phi}{dt} = B\pi \cdot 2r \frac{dr}{dt}$$

$$\text{When } r = 2\text{cm}, \frac{dr}{dt} = 1\text{mm s}^{-1}$$

$$\begin{aligned} e &= 0.025 \times \pi \times 2 \times 2 \times 10^{-2} \times 10^{-3} \\ &= 0.100 \times \pi \times 10^{-5} = \pi \mu V \end{aligned}$$

**Answer : (2)**

**Q. 17.** A particle of mass  $M$  is situated at the centre of a spherical shell of same mass

and radius  $a$ . The gravitational potential at a point situated at a  $\frac{a}{2}$  distance from the centre, will be:

1.

$$-\frac{3GM}{a}$$

2.

$$-\frac{2GM}{a}$$

3.

$$-\frac{GM}{a}$$

4.

$$-\frac{4GM}{a}$$

**Sol :** Potential at a point =

$$-\frac{GM}{a} - \frac{2GM}{a} = -\frac{3GM}{a}$$

**Answer : (1)**

**Q. 18.** A tuning fork of frequency 512 Hz makes 4 beats per second with the vibrating string of a piano. The beat frequency decreases to 2 beats per sec when the tension in the piano string is slightly increased. The frequency of the piano string before increasing the tension was:

1. 510 Hz
2. 514 Hz
3. 516 Hz
4. 508 Hz

**Sol.**

$$\Delta n_1 = 4, 512 \pm 4$$

$\Delta n_2 = 4$ , when tension is increased frequency increases. As number of Beats decreased, the frequency of string  $< 512 \Rightarrow 508$  Hz

**Answer : (4)**

**Q. 19.** A galvanometer has a coil of resistance 100 ohm and gives a full-scale deflection for 30 mA current. If it is to work as a voltmeter of 30 volt range, the resistance required to be added will be:

1. 900  $\Omega$
2. 1800  $\Omega$
3. 500  $\Omega$
4. 1000  $\Omega$

**Sol.**

$$30 = I_g (r + R)$$

$$\therefore R = \frac{30}{I_g} - r = \frac{30}{30 \times 10^{-3}} - 100$$
$$= 1000 - 100 = 900 \Omega$$

**Answer : (1)**

**Q. 20.** The energy of a hydrogen atom in the ground state is  $-13.6$  eV. The energy of a  $\text{He}^+$  ion in the first excited state will be:

1.  $-13.6$  eV
2.  $-27.2$  eV
3.  $-54.4$  eV
4.  $-6.8$  eV



**Sol.**

$$E_{H^+} = -Z^2 \times \frac{13.6}{n^2}$$

First excited state:  $n = 2, Z = 2$  for Helium.

$$\therefore E_{H^+} = -\frac{4}{2^2} \times 13.6 = -13.6 \text{ eV}$$

**Answer : (1)**

**Q. 21.** The dimension of  $\frac{1}{2} \epsilon_0 E^2$ , where  $\epsilon_0$ , where  $\epsilon_0$  is permittivity of free space and E is electric field, is:

(1)  $ML^2 T^{-2}$

(2)  $ML^{-1} T^{-2}$

(3)  $ML^2 T^{-2}$

(4)  $MLT^{-1}$

**Sol:**

$$\frac{1}{2} \epsilon_0 E^2$$

$$\Rightarrow \text{energy density} = \frac{ML^2 T^{-2}}{L^3} = ML^{-1} T^2$$

**Answer : (2)**

**Q. 22.** A man of 50 kg mass is standing in a gravity free space at a height of 10 m above the floor. He throws a stone of 0.5 kg mass downwards with a speed 2 m/s. When the stone reaches the floor, the distance of the man above the floor will be:

1. 9.9 m
2. 10.1 m
3. 10 m
4. 20 m

**Sol:** By momentum conservation,

$$50u + 0.5 \times 2 = 0$$

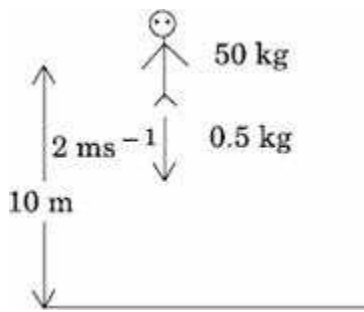
$$u = -\frac{1}{50} \text{ ms}^{-1}$$

$$\left[ \frac{1}{50} \text{ ms}^{-1} \text{ upward} \right]$$

$$\text{Time taken } t = \frac{10}{2} = 5 \text{ s}$$

$$\text{Distance moved by the man} = 5 \times \frac{1}{50} = 0.1 \text{ m}$$

$\therefore$  when the stone reaches the floor, the distance of the man above floor = 10.1 m



**Answer : (2)**

**Q. 23.** The total radiant energy per unit area, normal to the direction of incidence, received at a distance  $R$  from the centre of a star of radius  $r$ , whose outer surface radiates as a black body at a temperature  $T$  K is given by:

1.

$$\frac{\sigma r^2 T^4}{R^2}$$

2.

$$\frac{\sigma r^2 T^4}{4\pi R^2}$$

3.

$$\frac{\sigma r^4 T^4}{r^4}$$

4.

$$\frac{4\pi\sigma^2 T^4}{R^2}$$

(Where  $\sigma$  is Stefan's constant)

**Sol :**

**Answer : (1)**

**Q. 24.** A common emitter amplifier has a voltage gain of 50, an input impedance of 100  $\Omega$  and an output impedance of 200  $\Omega$ . The power gain of the amplifier is:

1. 500
2. 1000
3. 1250

$$E = \frac{S}{S_0} \sigma T^4 = \frac{4\pi r^2}{4\pi R^2} \sigma T^4$$
$$= \left(\frac{r}{R}\right)^2 \sigma T^4$$

4. 50

**Sol:** Power gain

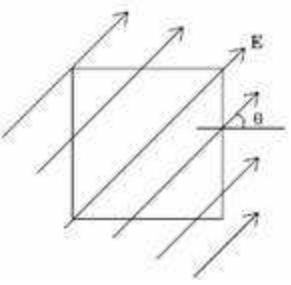
$$V_e \cdot I_e = \frac{V_e}{V_i} \cdot \frac{I_e}{I_i}$$
$$= \frac{V_e^2}{V_i^2} \cdot \frac{R_i}{R_o} = 50 \times 50 \times \frac{100}{200}$$
$$= \frac{2500}{2} = 1250$$

**Answer : (3)**

**Q. 25.** A vibration magnetometer placed in magnetic meridian has a small bar magnet. The magnet executes oscillations with a time period of 2 sec in earth's horizontal magnetic field of 24 microtesla. When a horizontal field of 18 microtesla is produced opposite to the earth's field by placing a current carrying wire, the new time period of magnet will be:

1. 1 s
2. 2 s
3. 3 s
4. 4 s

**Sol:** Time period,



$$T \propto \frac{1}{\sqrt{B}}$$

$$\frac{T_1}{T_2} = \sqrt{\frac{B_2}{B_1}}, T_2 = T_1 \sqrt{\frac{B_2}{B_1}}$$

$$= 2 \sqrt{\frac{24 \times 10^{-6}}{6 \times 10^{-6}}} = 4s$$

**Answer : (4)**

**Q. 26.** A square surface of side L meter in the plane of the paper is placed in a uniform electric field E (volt/m) acting along the same plane at an angle  $\theta$  with the horizontal side of the square as shown in **Figure**. The electric flux linked to the surface, in units of volt. m, is:

1.  $EL^2$
2.  $EL^2 \cos \theta$
3.  $EL^2 \sin \theta$
4. Zero

**Sol:**

$\phi = EA \cos \theta$ ,  $\theta$  - angle between E and normal to the surface,

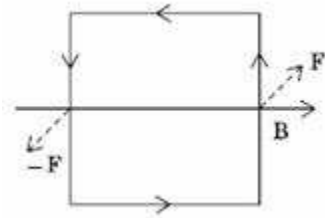
here  $\theta = \frac{\pi}{2} \Rightarrow \phi = 0$

**Answer : (4)**

**Q. 27.** A square current carrying loop is suspended in a uniform magnetic field acting in the plane of the loop. If the force on one arm of the loop is F, the net force on the remaining three arms of the loop is:

1.  $3\vec{F}$
2.  $-\vec{F}$
3.  $-3\vec{F}$
4.  $\vec{F}$

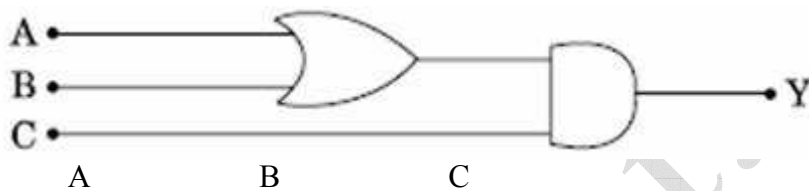
**Sol:**



Force on remaining arms =  $-F$

**Answer : (2)**

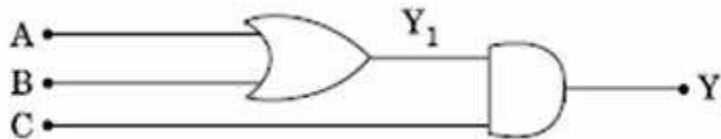
**Q. 28.** To get an output  $Y = 1$  from the circuit shown below, the input must be:



1.     0                 1                 0
2.     0                 0                 1
3.     1                 0                 1
4.     1                 0                 0

**Sol:**

A	B	C	Y
0	1	0	0
0	0	1	0
1	0	1	1
1	0	0	0



**Input: (1 0 1)**

**Answer : (3)**

**Q. 29.** A 220 volts input is supplied to a transformer. The output circuit draws a current of 2.0 ampere at 440 volts. If the efficiency of the transformer is 80%, the current drawn by the primary windings of the transformer is:

1. 3.6 ampere
2. 2.8 ampere
3. 2.5 ampere
4. 5.0 ampere

**Sol.**

$$\frac{V_2}{V_1} = 0.8 \frac{I_1}{I_2} \Rightarrow \frac{V_2 I_2}{V_1 I_1} = 0.8$$

$$V_1 = 220 \text{ V}, I_2 = 2.0 \text{ A}, V_2 = 440 \text{ V}$$

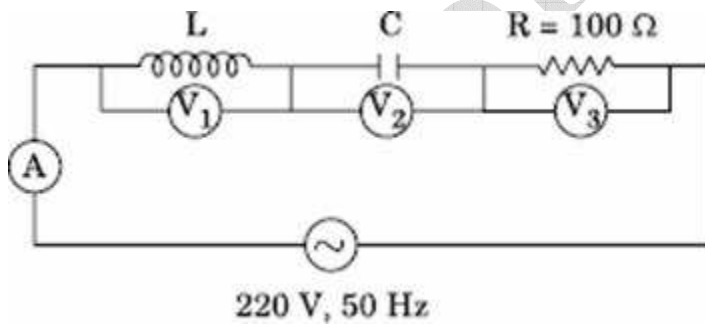
$$I_1 = \frac{V_2 I_2}{V_1} \times \frac{10}{8}$$

$$= \frac{440 \times 2 \times 100}{220 \times 8}$$

$$= 5 \text{ A}$$

**Answer : (4)**

**Q. 30.** In the given circuit the reading of voltmeter V1 and V2 are 300 volts each. The reading of the voltmeter V3 and ammeter A are respectively:



1. 150 V, 2.2 A
2. 220 V, 2.2 A
3. 220 V, 2.0 A
4. 100 V, 2.0 A

**Sol.**

$$V_L = V_C = 300 \text{ V} \Rightarrow \text{resonance}$$

$$\therefore V_R = 220 \text{ V}, I = \frac{220}{100} = 2.2 \text{ A}$$

$$\therefore (220 \text{ V}, 2.2 \text{ A})$$

**Answer : (2)**

**Q. 31.** A lens having focal length  $f$  and aperture of diameter  $d$  forms an image of intensity  $I$ . Aperture of diameter  $d/2$  in central region of lens is covered by a black paper. Focal length of lens and intensity of image now will be respectively:

1.

$$F \text{ and } \frac{1}{4}$$

2.

$$\frac{3f}{4} \text{ and } \frac{1}{2}$$

3.

$$F \text{ and } \frac{3I}{4}$$

4.

$$\frac{f}{2} \text{ and } \frac{I}{2}$$

**Sol:** By covering aperture, focal length does not change. But intensity is reduced by

$\frac{1}{4}$  times.

$$I' = \frac{3I}{4}$$

$$\therefore f = \frac{3f}{4}$$

**Answer : (3)**

**Q. 32.** An alpha nucleus of energy  $\frac{1}{2}mv^2$  bombards a heavy nuclear target of charge  $Ze$ . Then the distance of closest approach for the alpha nucleus will be proportional to:

1.

$$\frac{1}{ze}$$

2.

$$v^2$$

3.

$$\frac{1}{m}$$

4.

$$\frac{1}{v^4}$$

**Sol:**

$$\frac{1}{2}mv^2 = \frac{1}{4\pi\epsilon_0} \frac{q_a Ze}{r_0} \quad r_0 \propto Ze, \propto q_a$$
$$r_0 = \frac{2}{4\pi\epsilon_0} \frac{q_a Ze}{mv^2} \quad \propto \frac{1}{m} \Rightarrow (3)$$
$$\propto \frac{1}{V^2}$$

**Answer : (3)**

**Q. 33.** The mass of a  ${}^7_3\text{Li}$  nucleus is 0.042 u less than the sum of the masses of all its nucleons. The binding energy per nucleon of  ${}^7_3\text{Li}$  nucleus is nearly :

1. 46 MeV
2. 5.6 MeV
3. 3.9 MeV
4. 23 MeV

**Sol:**

$$\Delta m = 0.042 \times 931 = 42 \text{ MeV}$$

$$\therefore \text{B.E./nucleon} = \frac{42}{7} = 6 \text{ MeV} \quad 5.6 \text{ MeV}$$

**Answer : (2)**

**Q. 34.** A beam of cathode rays is subjected to crossed Electric (E) and Magnetic fields (B). The fields are adjusted such that the beam is not deflected. The specific charge of the cathode rays is given by:

1.

$$\frac{B^2}{2VE^2}$$



2.

$$\frac{2 VB^2}{E^2}$$

3.

$$\frac{2 VE^2}{B^2}$$

4.

$$\frac{E^2}{2 VB^2}$$

(Where V is the potential difference between cathode and anode)

**Sol:**

$$eE = eVB \quad \therefore \frac{V \frac{E}{B}}{\frac{1}{2} mv^2} = \frac{e}{m} = \frac{v^2}{2V} = \frac{E^2}{2VB^2}$$

**Answer : (4)**

**Q. 35.** A particle has initial velocity  $(3\hat{i} + 4\hat{j})$  and has acceleration  $(0.4\hat{i} + 0.3\hat{j})$ . Its speed after 10 s is:

1. 7 units
2.  $7\sqrt{2}$  units
3. 8.5 units
4. 10 units

**Sol:**

$$\begin{aligned} \vec{u} &= 3\hat{i} + 4\hat{j}, \vec{a} = 0.4\hat{i} + 0.3\hat{j} \\ V_x &= u_x + a_x \times 10 = 3 + 4 = 7 \text{ ms}^{-1} \\ V_y &= 4 + 0.3 \times 10 = 4 + 3 = 7 \text{ ms}^{-1} \\ \therefore v &= \sqrt{v_x^2 + v_y^2} = 7\sqrt{2} \text{ ms}^{-1} \end{aligned}$$

**Answer : (2)**

**Q. 36.** A particle moves a distance x in time t according to equation  $x = (t + 5)^{-1}$ . The acceleration of particle is proportional to:

1. (Velocity)<sup>3/2</sup>
2. (distance)<sup>2</sup>
3. (distance)<sup>-2</sup>
4. (velocity)<sup>2/3</sup>

**Sol:**

$$x = \frac{1}{t+5}, \quad \frac{dx}{dt} = \frac{-1}{(t+5)^2} = v$$

$$\frac{d^2x}{dt^2} = \frac{2}{(t+5)^3} = 2x^3$$

$$\text{Now } \frac{1}{(t+5)} \propto v^{\frac{1}{2}}$$

$$\therefore \frac{1}{(t+5)^3} \propto v^{\frac{3}{2}} \propto \frac{d^2x}{dt^2}$$

**Answer : (1)**

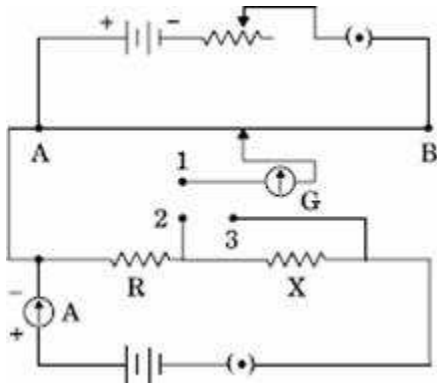
**Q. 37.** Two particles which are initially at rest, move towards each other under the action of their internal attraction. If their speeds are  $v$  and  $2v$  at any instant, then the speed of centre of mass of the system will be:

1.  $2v$
2. Zero
3.  $1.5v$
4.  $v$

**Sol:** No change in state of motion of COM due to internal forces.  
speed of COM = zero

**Answer : (2)**

**Q. 38.** A potentiometer circuit is set up as shown. The potential gradient, across the potentiometer wire, is  $k$  volt/cm and the ammeter, present in the circuit, reads  $1.0$  A when two way key is switched off. The balance points, when the key between the terminals (i) 1 and 2 (ii) 1 and 3, is plugged in, are found to be at lengths  $l_1$  cm and  $l_2$  cm respectively. The magnitudes, of the resistors  $R$  and  $X$ , in ohms, are then, equal, respectively, to:



1.  $K(l_2 - l_1)$  and  $Kl_2$
2.  $Kl_1$  and  $K(l_2 - l_1)$
3.  $K(l_2 - l_1)$  and  $Kl_1$
4.  $Kl_1$  and  $Kl_2$

**Sol :**

$$\text{P.D across } R = IR = Kl_1 \rightarrow R = Kl_1 \quad I = 1A$$

P.D across

$$(X + R) = I(X + R) = Kl_2 \rightarrow X + R = Kl_2$$

$$X = K(l_2 - l_1)$$

$$\therefore R = Kl_1, X = K(l_2 - l_1)$$

**Answer : (2)**

**Q. 39.** A gramophone record is revolving with an angular velocity  $\omega$ . A coin is placed at a distance  $r$  from the centre of the record. The static coefficient of friction is  $\mu$ . The coin will revolve with the record if:

1.  $r = \mu g \omega^2$
2.  $r < \frac{\mu g}{\omega^2}$

3.

$$r < \frac{\mu_0 \mu g}{\omega^2}$$

4.

$$r \geq \frac{\mu_0 \mu g}{\omega^2}$$

**Sol.**

$$m r \omega^2 \leq \mu_0 \mu g$$

$$r \leq \frac{\mu_0 \mu g}{\omega^2}$$

**Answer : (3)**

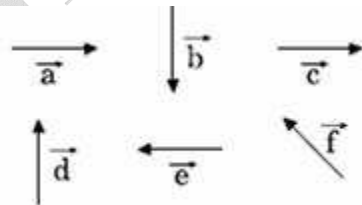
**Q. 40.** Which of the following statement is **false** for the properties of electromagnetic waves?

1. Both electric and magnetic field vectors attain the maxima and minima at the same place and same time
2. The energy in electromagnetic wave is divided equally between electric and magnetic vectors
3. Both electric and magnetic field vectors are parallel to each other and perpendicular to the direction of propagation of wave
4. These waves do not require any material medium for propagation

**Answer : (3)**

**Q. 41.** Six vectors,  $\vec{a}$  through  $\vec{f}$  have the magnitudes and directions indicated in the figure. Which of the following statements is true?

1.



2.

$$\vec{b} + \vec{c} = \vec{f}$$

3.

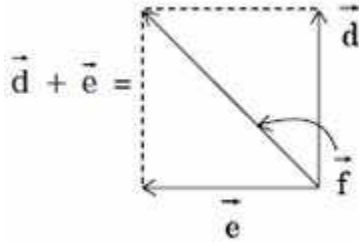
$$\vec{d} + \vec{c} = \vec{f}$$

4.

$$\vec{d} + \vec{e} = \vec{f}$$

5.

$$\vec{b} + \vec{e} = \vec{f}$$



$$\therefore \vec{b} + \vec{e} = \vec{f}$$

**Answer: (3)**

**Q. 42.** In producing chlorine by electrolysis 100 kW power at 125 V is being consumed. How much chlorine per minute is liberated?

(*E.C.E* of chlorine is  $0.367 \times 10^{-6} \text{ Kg/c}$ )

1.

$$1.76 \times 10^{-3} \text{ Kg}$$

2.

$$9.67 \times 10^{-3} \text{ Kg}$$

3.

$$17.61 \times 10^{-3} \text{ Kg}$$

4.

$$3.67 \times 10^{-3} \text{ Kg}$$

**Sol.**

$$I = \frac{100 \times 10^3}{125} \text{ A}$$

$$\text{E.C.E} = 0.367 \times 10^{-6} \text{ Kg C}^{-1}$$

$$\text{Charge Per minute} = \frac{10^5 \times 60}{125} \text{ C}$$

$$\text{Mass liberated} = \frac{6 \times 10^6}{125} \times 0.367 \times 10^{-6}$$

$$= \frac{6 \times 1000 \times 0.367 \times 10^{-3}}{125} = 17.616 \times 10^{-3} \text{ Kg}$$

**Answer : (3)**

**Q. 43.** If  $\Delta U$  and  $\Delta W$  represent the increase in internal energy and work done by the system respectively in a thermodynamical process, which of the following is true?

1.  $\Delta U = -\Delta W$ , in a adiabatic process
2.  $\Delta U = \Delta W$ , in a isothermal process
3.  $\Delta U = \Delta W$ , in a adiabatic process
4.  $\Delta U = -\Delta W$ , in a isothermal process.

**Sol:**

$$\Delta Q = \Delta U + \Delta W$$

In adiabatic,  $\Delta Q = 0$

$$\Delta U = -\Delta W$$

In isothermal,  $\Delta U = 0$

**Answer : (1)**

**Q. 44.** The device that can act as a complete electronic circuit is:

1. Junction diode
2. Integrated circuit
3. Junction transistor
4. Zener diode

**Answer : (2)**

**Q. 45.** The activity of a radioactive sample is measured as  $N_0$  counts per minute at  $t = 0$  and  $N_0/e$  counts per minute at  $t = 5$  minutes. The time (in minutes) at which the activity reduces to half its value is:

1.  $\log_e 2/5$
2.  $\frac{5}{\log_e 2}$
3.  $5 \log_{10} 2$
4.  $5 \log_e 2$

**Sol.**

$$N = N_0 e^{-\lambda t}, t = 5 \text{ min} \cdot \frac{N_0}{e} = N_0 \cdot e^{-5\lambda}$$

$$5\lambda = 1, \lambda = \frac{1}{5}, T_{1/2} = \frac{\ln 2}{\lambda} = 5 \ln 2$$

**Answer : (4)**

**Q. 46.** A thin ring of radius R meter has charge q coulomb uniformly spread on it. The ring rotates about its axis with a constant frequency of f revolutions/s. The value of magnetic induction in  $\text{Wb/m}^2$  at the centre of the ring is:

1.  $\frac{\mu_0 q f}{2\pi R}$

2.  $\frac{\mu_0 q}{2\pi fR}$

3.  $\frac{\mu_0 q}{2 fR}$

4.  $\frac{\mu_0 qf}{2 R}$

**Sol.**

$$\text{Current } I = \frac{q}{T} = \frac{q \omega}{2\pi}$$

$$B = \frac{\mu_0 I}{2R} = \frac{\mu_0}{2R} \frac{q^2 \pi f}{2\pi} = \frac{\mu_0 qf}{2R}$$

**Answer : (4)**

**Q. 47.** A ball moving with velocity 2 m/s collides head on with another stationary ball of double the mass. If the coefficient of restitution is 0.5, then their velocities (in m/s) after collision will be:

1. 0, 1
2. 1, 1
3. 1, 0.5
4. 0, 2

**Sol.**

$$m - u = 2 \text{ ms}^{-1}, 2m - 0$$

$$e = \frac{V_1' - V_2'}{V_2 - V_1}$$

$$2m = mv_1 + 2mv_2$$

$$0.5 = \frac{V_2 - V_1}{2} \quad \therefore V_2 = 1 + V_1$$

$$2 = V_1 + 2 + 2V_1, V_1 = 0, V_2 = 1 \text{ ms}^{-1}$$

**Answer : (1)**

**Q. 48.** The period of oscillation of a mass M suspended from a spring of negligible mass is T. If along with it another mass M is also suspended, the period of oscillation will now be:

1. T
2.  $T/\sqrt{2}$
3.  $2T$
4.  $\sqrt{2} T$

**Sol.**

$$T = 2\pi \sqrt{\frac{m}{R}}$$

$$\therefore \frac{T_1}{T_2} = \sqrt{\frac{M_1}{M_2}}, T_2 = T_1 \sqrt{\frac{M_2}{M_1}} = T_1 \sqrt{\frac{2M}{M}}$$

$$T_2 = T_1 = \sqrt{2} T \text{ (where } T_1 = T)$$

**Answer : (4)**

**Q. 50.** Which one of the following statement is FALSE?

1. Pure Si doped with trivalent impurities gives a p-type semiconductor
2. Majority carriers in a n-type semiconductor are holes
3. Minority carriers in a p-type semiconductor are electrons
4. The resistance of intrinsic semiconductor decreases with increase of temperature



**Answer : (2)**

*indiapmt.com*